

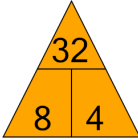


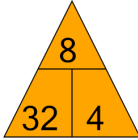
Math worksheet on 'Fact Family - Multiplication - Fact to Triangle (Level 2)'. Part of a broader unit on 'Multiplication From Counting - Intro'

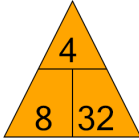
Learn online: app.mobius.academy/math/units/multiplication_from_counting_intro/

1 What fact family triangle would give this multiplication fact?

$$8 \times 4 = 32$$

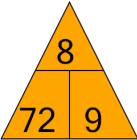
a 

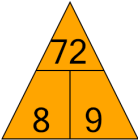
b 

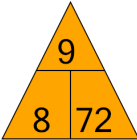
c 

2 What fact family triangle would give this multiplication fact?

$$9 \times 8 = 72$$

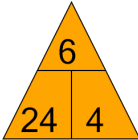
a 

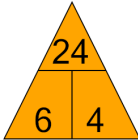
b 

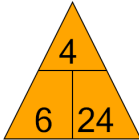
c 

3 What fact family triangle would give this division fact?

$$24 \div 4 = 6$$

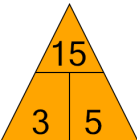
a 

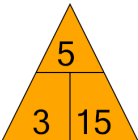
b 

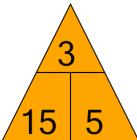
c 

4 What fact family triangle would give this division fact?

$$15 \div 5 = 3$$

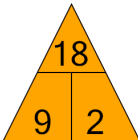
a 

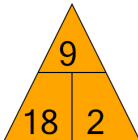
b 

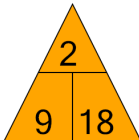
c 

5 What fact family triangle would give this multiplication fact?

$$2 \times 9 = 18$$

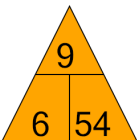
a 

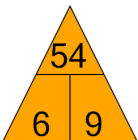
b 

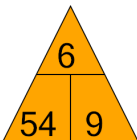
c 

6 What fact family triangle would give this multiplication fact?

$$6 \times 9 = 54$$

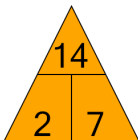
a 

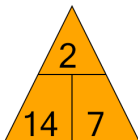
b 

c 

7 What fact family triangle would give this division fact?

$$14 \div 7 = 2$$

a 

b 

c 