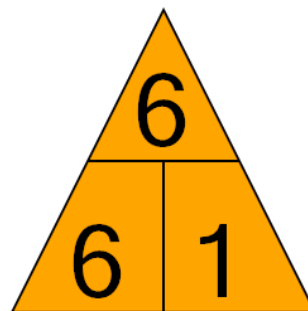




Math worksheet on 'Fact Family - Multiplication - Triangle to Fact (Level 2)'. Part of a broader unit on 'Multiplication - Times Table to 13 - Practice'

Learn online: app.mobius.academy/math/units/multiplication_times_tables_practice/

1



Which division fact comes from this fact family

a

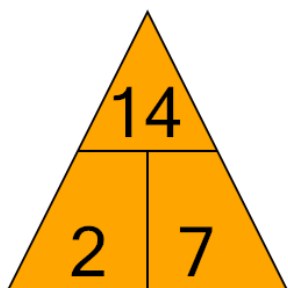
$$6 \div 1 = 6$$

b

$$1 \div 6 = 6$$

2

Which division fact comes from this fact family



a

$$2 \div 14 = 7$$

b

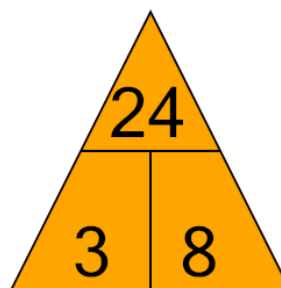
$$7 \div 2 = 14$$

c

$$14 \div 2 = 7$$

3

Which division fact comes from this fact family



a

$$9 \div 4 = 36$$

b

$$3 \div 24 = 8$$

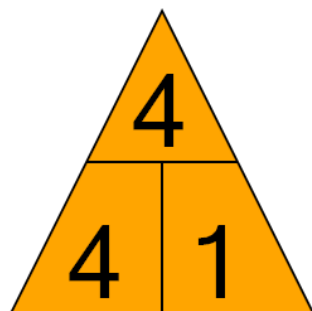
c

$$8 \div 3 = 24$$

d

$$24 \div 3 = 8$$

4



Which multiplication fact comes from this fact family

a

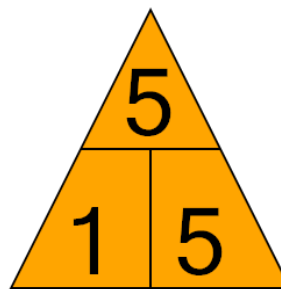
$$1 \times 4 = 4$$

b

$$4 \times 4 = 1$$

5

Which multiplication fact comes from this fact family



a

$$5 \times 1 = 5$$

b

$$6 \times 18 = 3$$

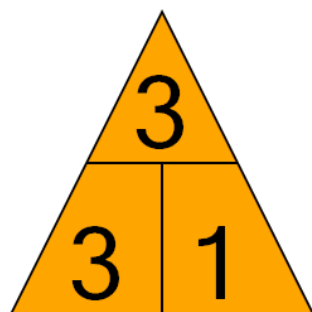
c

$$5 \times 5 = 1$$

d

$$21 \times 3 = 7$$

6



Which division fact comes from this fact family

a

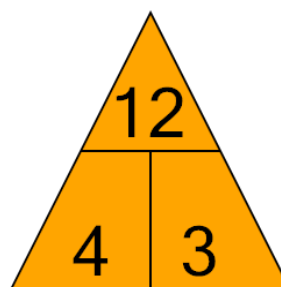
$$1 \div 3 = 3$$

b

$$3 \div 3 = 1$$

7

Which multiplication fact comes from this fact family



a

$$3 \times 4 = 12$$

b

$$12 \times 4 = 3$$

c

$$3 \times 12 = 4$$