

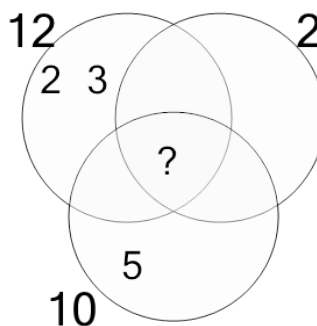


Math worksheet on 'Factoring - Venn Diagrams - 3 Numbers - Populated Venn without Center to GCF (Level 1)'. Part of a broader unit on 'Factoring and Greatest Common Factor - Advanced'

Learn online:

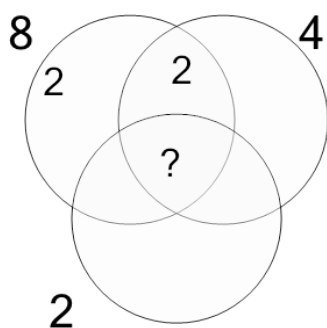
app.mobius.academy/math/units/factoring_and_greatest_common_factor_advanced/

1 Complete the factor diagram and find the greatest common factor of these numbers



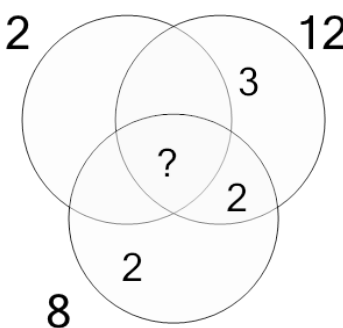
a	b	c
14	6	3
d	e	f
4	2	1

2 Complete the factor diagram and find the greatest common factor of these numbers



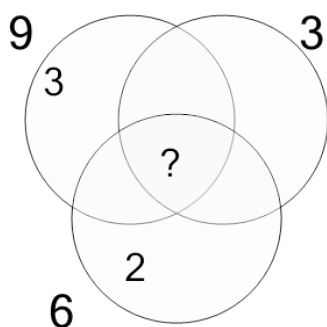
a	b	c
14	15	3
d	e	f
5	2	1

3 Complete the factor diagram and find the greatest common factor of these numbers



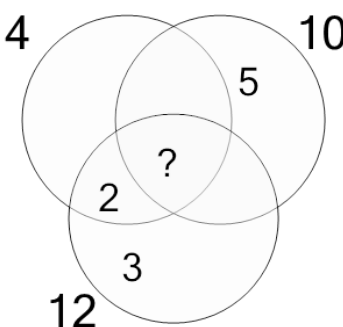
a	b	c
3	5	15
d	e	f
7	2	1

4 Complete the factor diagram and find the greatest common factor of these numbers



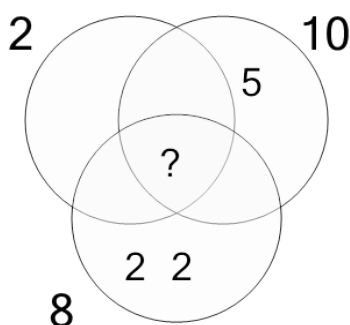
a	b	c
13	6	5
d	e	f
3	14	1

5 Complete the factor diagram and find the greatest common factor of these numbers



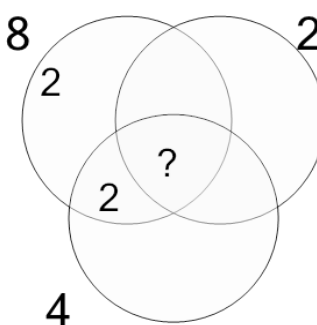
a	b	c
4	3	2
d	e	f
5	9	1

6 Complete the factor diagram and find the greatest common factor of these numbers



a	b	c
9	14	1
d	e	f
13	15	2

7 Complete the factor diagram and find the greatest common factor of these numbers



a	b	c
8	6	15
d	e	f
10	1	2