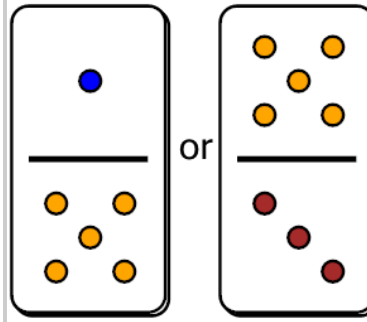




Math worksheet on 'Fraction Dominoes Compare - Above vs Below 1 (Level 1)'. Part of a broader unit on 'Fractions - Mixed - Intro'

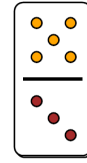
Learn online: app.mobius.academy/math/units/fractions_intro/

1

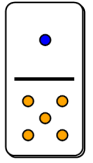


Which domino fraction would be larger?

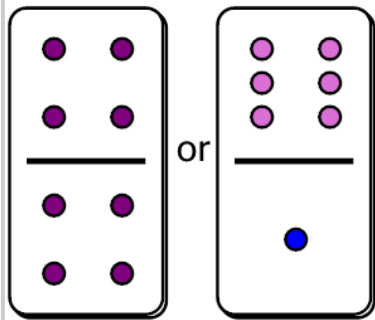
a



b

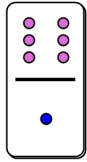


2

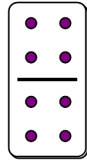


Which domino fraction would be larger?

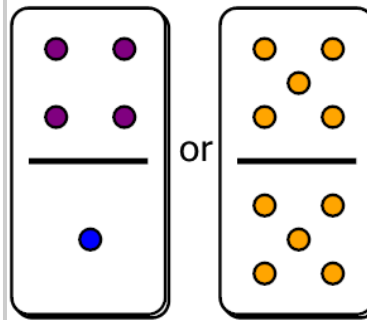
a



b

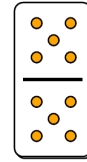


3

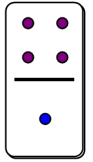


Which domino fraction would be larger?

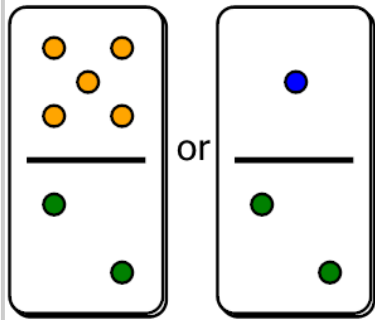
a



b

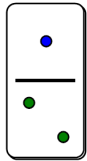


4

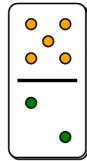


Which domino fraction would be larger?

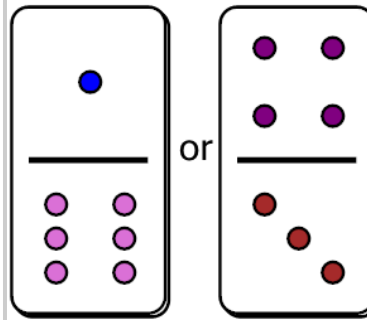
a



b

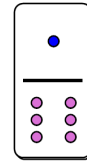


5

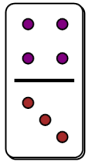


Which domino fraction would be larger?

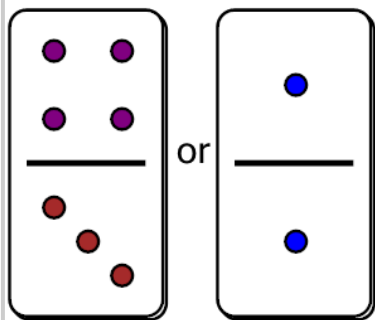
a



b

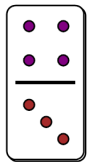


6

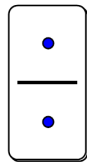


Which domino fraction would be larger?

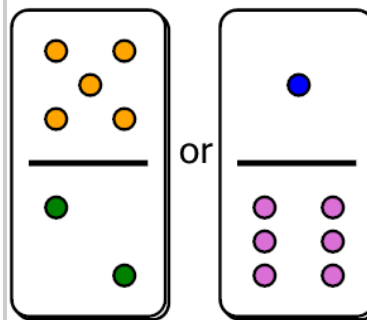
a



b

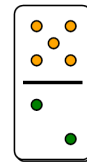


7



Which domino fraction would be larger?

a



b

