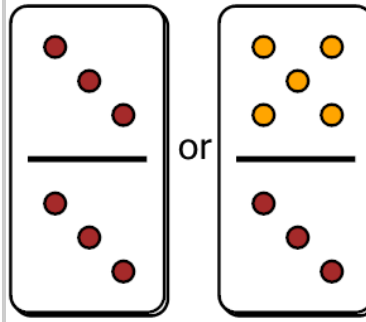




Math worksheet on 'Fraction Dominoes Compare - Same Denominator Above 1 (Level 1)'. Part of a broader unit on 'Fractions - Mixed - Intro'

Learn online: [app.mobius.academy/math/units/fractions\\_intro/](http://app.mobius.academy/math/units/fractions_intro/)

1

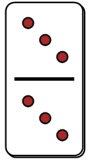


Which domino fraction would be larger?

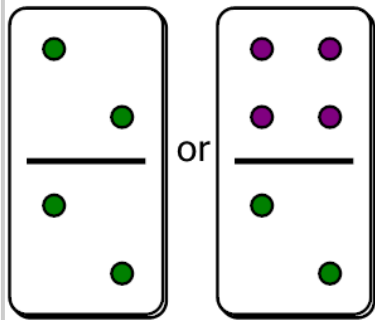
a



b

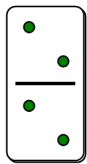


2

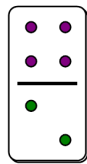


Which domino fraction would be larger?

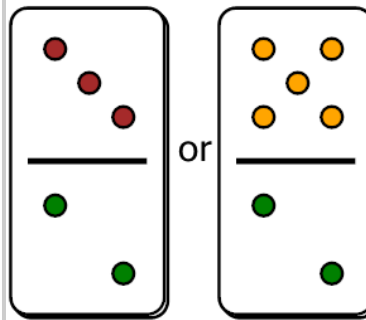
a



b

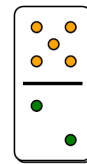


3

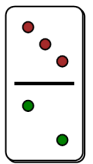


Which domino fraction would be larger?

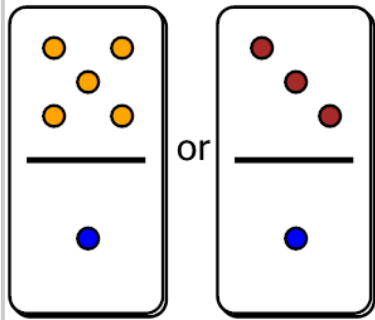
a



b

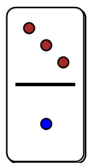


4

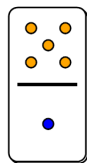


Which domino fraction would be larger?

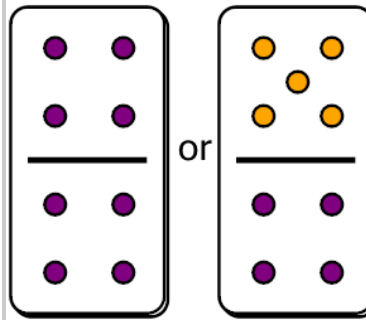
a



b

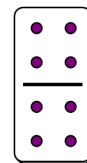


5

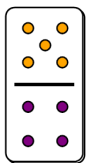


Which domino fraction would be larger?

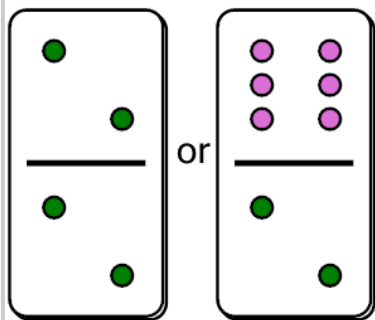
a



b

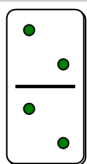


6

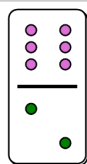


Which domino fraction would be larger?

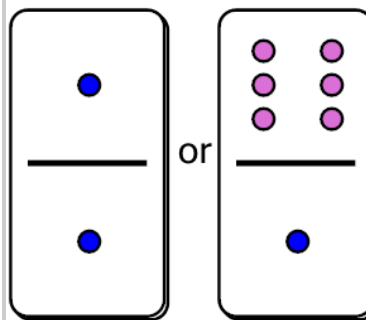
a



b

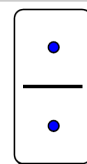


7



Which domino fraction would be larger?

a



b

