



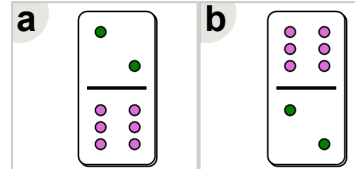
Math worksheet on 'Fraction Dominoes - To Domino (Mixed) (Level 1)'. Part of a broader unit on 'Fractions - Mixed - Intro'

Learn online: app.mobius.academy/math/units/fractions_intro/

1

3

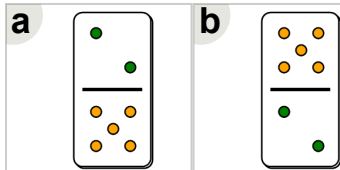
Which domino shows this fraction?



2

$2\frac{1}{2}$

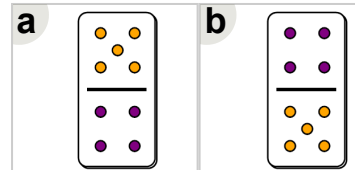
Which domino shows this fraction?



3

$1\frac{1}{4}$

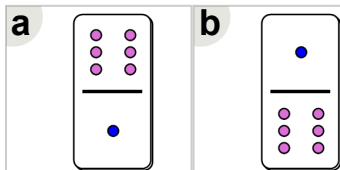
Which domino shows this fraction?



4

6

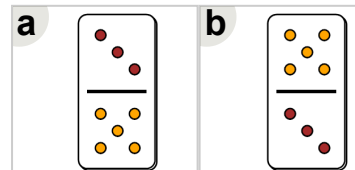
Which domino shows this fraction?



5

$1\frac{2}{3}$

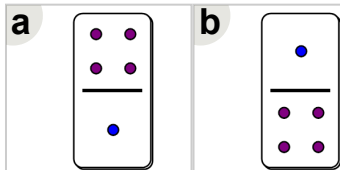
Which domino shows this fraction?



6

4

Which domino shows this fraction?



7

$1\frac{1}{2}$

Which domino shows this fraction?

