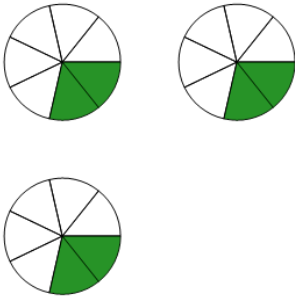




Math worksheet on 'Fraction Multiplication - Simple by Whole Concept Intro - Picture to Answer (Level 2)'. Part of a broader unit on 'Fraction Multiplication - Intro'

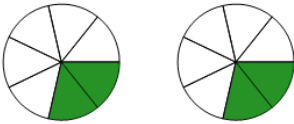
Learn online: app.mobius.academy/math/units/fractions_multiplication_intro/

1 What is the result of multiplying $\frac{2}{7}$ by 3? Simplify the answer



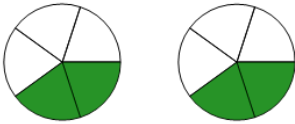
a 5	b $\frac{5}{8}$	c $\frac{2}{21}$
d $\frac{6}{7}$	e $\frac{5}{7}$	

2 What is the result of multiplying $\frac{2}{7}$ by 2? Simplify the answer



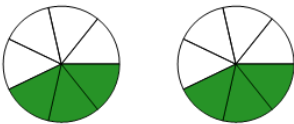
a 4	b $\frac{1}{2}$	c $\frac{4}{7}$
d $\frac{1}{7}$		

3 What is the result of multiplying $\frac{2}{5}$ by 2? Simplify the answer



a $\frac{1}{5}$	b 4	c $\frac{4}{5}$
d $\frac{2}{3}$		

4 What is the result of multiplying $\frac{3}{7}$ by 2? Simplify the answer



a 5	b $\frac{3}{14}$	c $\frac{5}{7}$
d $\frac{6}{7}$	e $\frac{5}{8}$	