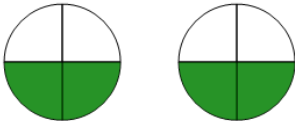




Math worksheet on 'Fraction Multiplication - Simple by Whole Concept Intro - Picture to Equation (Level 1)'. Part of a broader unit on 'Fraction Multiplication - Intro'

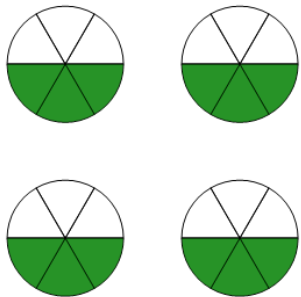
Learn online: [app.mobius.academy/math/units/fractions\\_multiplication\\_intro/](http://app.mobius.academy/math/units/fractions_multiplication_intro/)

**1** Find the multiplication equation that represents this picture



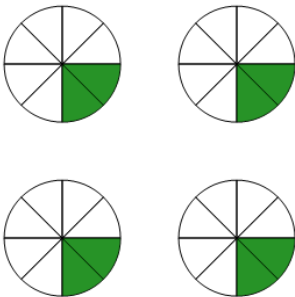
<b>a</b>	$2 \cdot \frac{3}{4}$	<b>b</b>	$2 \times \frac{2}{4}$
<b>c</b>	$3 \times \frac{2}{4}$	<b>d</b>	$2 \cdot \frac{2}{5}$

**2** Find the multiplication equation that represents this picture



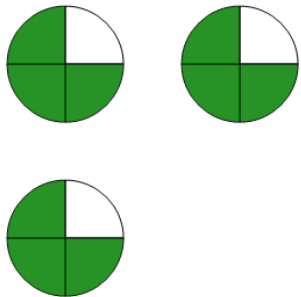
<b>a</b>	$4 \times \frac{3}{6}$	<b>b</b>	$4 \cdot \frac{4}{6}$
<b>c</b>	$4 \cdot \frac{3}{5}$	<b>d</b>	$3 \times \frac{3}{6}$

**3** Find the multiplication equation that represents this picture



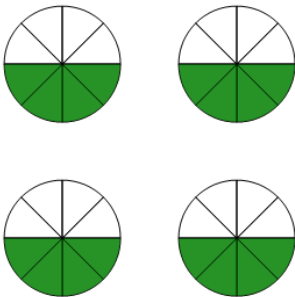
<b>a</b>	$4 \times \frac{2}{8}$	<b>b</b>	$4 \cdot \frac{3}{8}$
<b>c</b>	$3 \times \frac{2}{8}$	<b>d</b>	$4 \cdot \frac{2}{7}$

**4** Find the multiplication equation that represents this picture



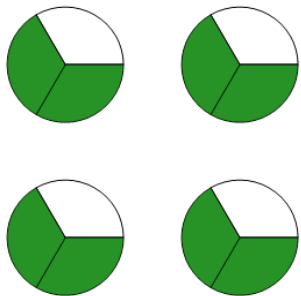
<b>a</b>	$3 \cdot \frac{3}{5}$	<b>b</b>	$2 \times \frac{3}{4}$
<b>c</b>	$3 \times \frac{3}{4}$	<b>d</b>	$3 \cdot \frac{4}{4}$

**5** Find the multiplication equation that represents this picture



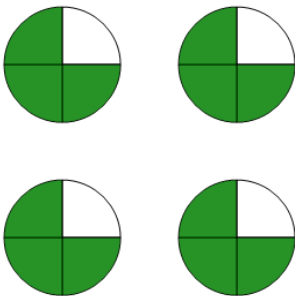
<b>a</b>	$4 \times \frac{4}{8}$	<b>b</b>	$4 \cdot \frac{2}{8}$
<b>c</b>	$3 \times \frac{4}{8}$	<b>d</b>	$4 \cdot \frac{4}{7}$

**6** Find the multiplication equation that represents this picture



<b>a</b>	$4 \times \frac{2}{3}$	<b>b</b>	$3 \times \frac{2}{3}$
<b>c</b>	$4 \cdot \frac{2}{4}$	<b>d</b>	$4 \cdot \frac{3}{3}$

**7** Find the multiplication equation that represents this picture



<b>a</b>	$4 \cdot \frac{4}{4}$	<b>b</b>	$3 \times \frac{3}{4}$
<b>c</b>	$4 \cdot \frac{3}{5}$	<b>d</b>	$4 \times \frac{3}{4}$