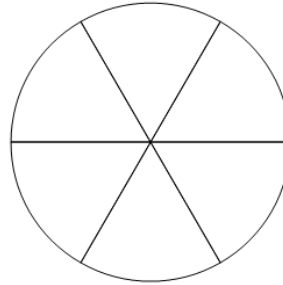




Math worksheet on 'Fraction Naming - Empty Image to Denominator Number (Level 1)'. Part of a broader unit on 'Fraction Foundations - Intro'

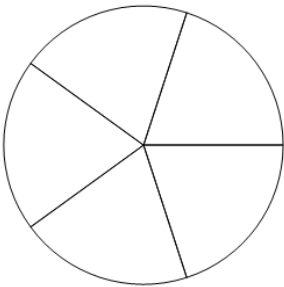
Learn online: [app.mobius.academy/math/units/fractions\\_foundations\\_intro/](http://app.mobius.academy/math/units/fractions_foundations_intro/)

**1** How many parts is this whole split into?



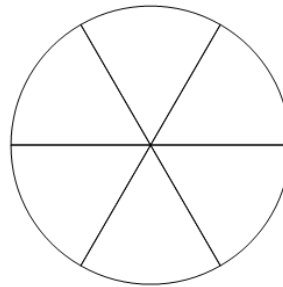
<b>a</b>	<b>b</b>	<b>c</b>
9	8	3
<b>d</b>		
6		

**2** How many parts is this whole split into?



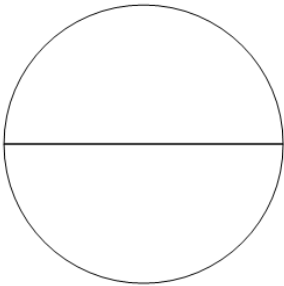
<b>a</b>	<b>b</b>	<b>c</b>
4	5	7
<b>d</b>		
6		

**3** How many parts is this whole split into?



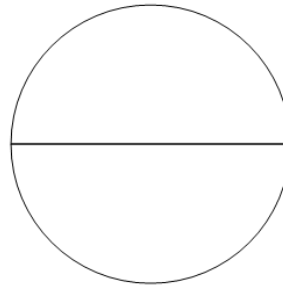
<b>a</b>	<b>b</b>	<b>c</b>
4	9	2
<b>d</b>		
6		

**4** How many parts is this whole split into?



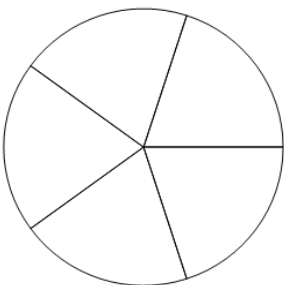
<b>a</b>	<b>b</b>	<b>c</b>
2	7	5
<b>d</b>		
4		

**5** How many parts is this whole split into?



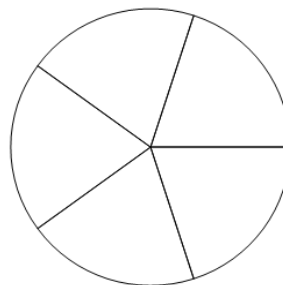
<b>a</b>	<b>b</b>	<b>c</b>
3	4	5
<b>d</b>		
2		

**6** How many parts is this whole split into?



<b>a</b>	<b>b</b>	<b>c</b>
3	5	7
<b>d</b>		
8		

**7** How many parts is this whole split into?



<b>a</b>	<b>b</b>	<b>c</b>
9	7	5
<b>d</b>		
6		