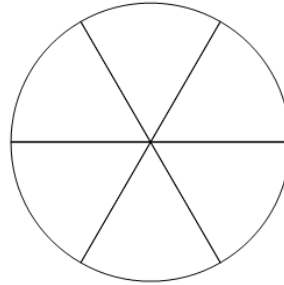




Math worksheet on 'Fraction Naming - Empty Image to Denominator Number (Level 2)'. Part of a broader unit on 'Fraction Foundations - Intro'

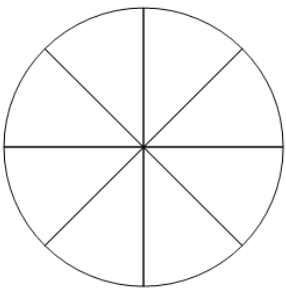
Learn online: app.mobius.academy/math/units/fractions_foundations_intro/

1 How many parts is this whole split into?



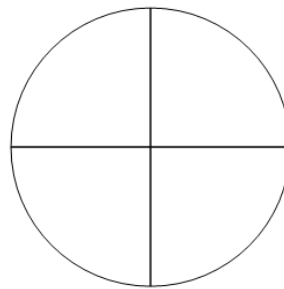
a	b	c
4	2	6
d		
9		

2 How many parts is this whole split into?



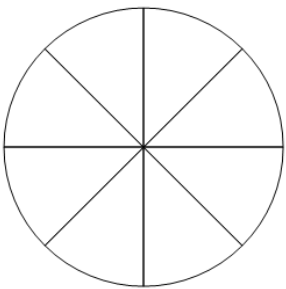
a	b	c
3	5	8
d		
6		

3 How many parts is this whole split into?



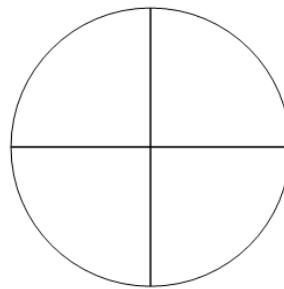
a	b	c
4	3	8
d		
6		

4 How many parts is this whole split into?



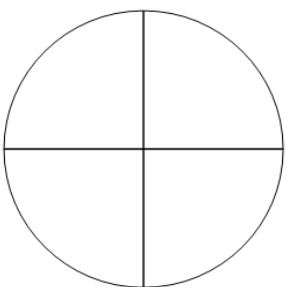
a	b	c
2	5	6
d		
8		

5 How many parts is this whole split into?



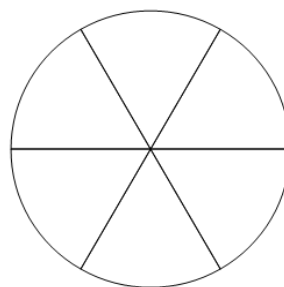
a	b	c
7	4	5
d		
6		

6 How many parts is this whole split into?



a	b	c
6	8	4
d		
7		

7 How many parts is this whole split into?



a	b	c
3	9	6
d		
4		