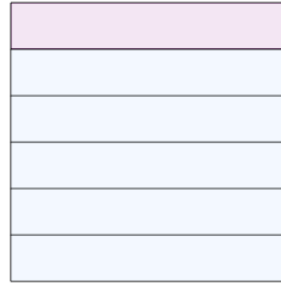




Math worksheet on 'Fraction Naming - Fraction Image to Denominator Number (Level 1)'. Part of a broader unit on 'Fraction Foundations - Intro'

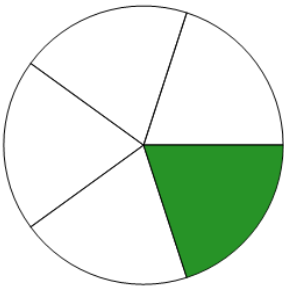
Learn online: app.mobius.academy/math/units/fractions_foundations_intro/

1 How many parts is this fraction split into?




a	b	c
6	8	3
d		
4		

2 How many parts is this fraction split into?




a	b	c
6	8	5
d		
4		

3 How many parts is this fraction split into?



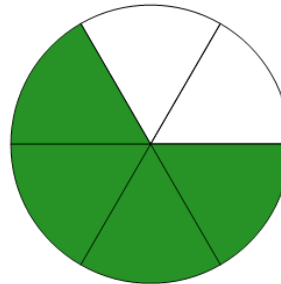
a	b	c
6	4	3
d		
8		

4 How many parts is this fraction split into?




a	b	c
2	5	6
d		
7		

5 How many parts is this fraction split into?




a	b	c
9	4	8
d		
6		

6 How many parts is this fraction split into?



a	b	c
2	5	8
d		
9		

7 How many parts is this fraction split into?



a	b	c
8	9	2
d		
7		