



Math worksheet on 'Fraction Naming - Fraction Image to Denominator Number (Level 2)'. Part of a broader unit on 'Fraction Foundations - Intro'


Learn online: [app.mobius.academy/math/units/fractions\\_foundations\\_intro/](http://app.mobius.academy/math/units/fractions_foundations_intro/)

**1** How many parts is this fraction split into?




a	b	c
2	6	9
d		
8		

**2** How many parts is this fraction split into?




a	b	c
3	2	9
d		
4		

**3** How many parts is this fraction split into?



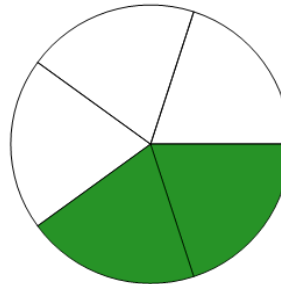
a	b	c
9	2	8
d		
6		

**4** How many parts is this fraction split into?




a	b	c
2	8	7
d		
4		

**5** How many parts is this fraction split into?




a	b	c
2	7	5
d		
9		

**6** How many parts is this fraction split into?



a	b	c
7	2	4
d		
9		

**7** How many parts is this fraction split into?



a	b	c
2	8	6
d		
7		