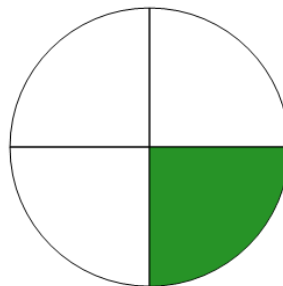




Math worksheet on 'Fraction Naming - Fraction Image to Fraction Name (Level 1)'. Part of a broader unit on 'Fraction Foundations - Intro'

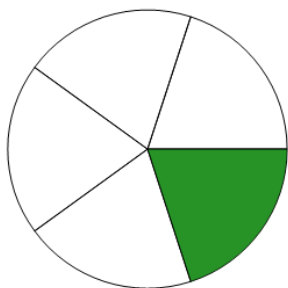
Learn online: app.mobius.academy/math/units/fractions_foundations_intro/

1 What is the name of this fraction?



- | | |
|---|---------------|
| a | one fourth |
| b | three fourths |
| c | one half |
| d | two fifths |


2 What is the name of this fraction?



- | | | | |
|---|-----------|---|-------------|
| a | one half | b | two fifths |
| c | one fifth | d | five ninths |

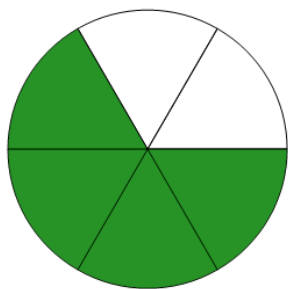
3

What is the name of this fraction?



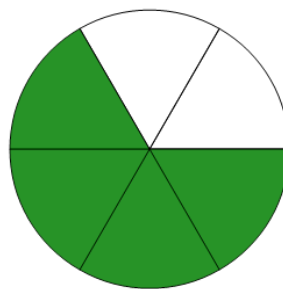
- | | | | |
|---|----------|---|-------------|
| a | one half | b | one seventh |
|---|----------|---|-------------|

4 What is the name of this fraction?



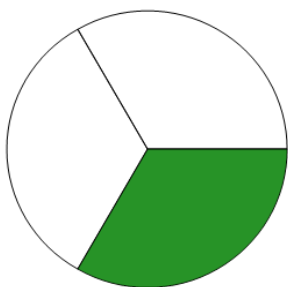
- | | |
|---|---------------|
| a | five sevenths |
| b | one seventh |
| c | two quarters |
| d | four sixths |

5 What is the name of this fraction?



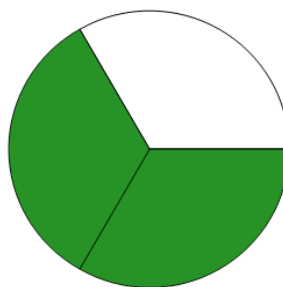
- | | |
|---|---------------|
| a | four sixths |
| b | three fourths |
| c | four eighths |
| d | one half |

6 What is the name of this fraction?



- | | |
|---|---------------|
| a | one third |
| b | one half |
| c | one fourth |
| d | five sevenths |

7 What is the name of this fraction?



- | | | | |
|---|-------------|---|------------|
| a | one third | b | one fifth |
| c | four sixths | d | two thirds |