




Math worksheet on 'Fraction Naming - Fraction Image to Numerator Number (Level 1)'. Part of a broader unit on 'Fraction Foundations - Intro'


Learn online: app.mobius.academy/math/units/fractions_foundations_intro/

1 How many parts of this fraction are colored in?



a	b	c
1	2	4
d		
9		

2 How many parts of this fraction are colored in?



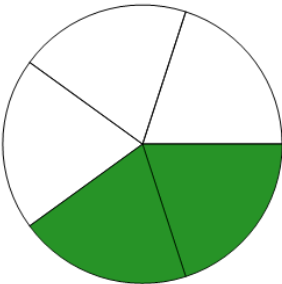
a	b	c
1	8	7
d		
4		

3 How many parts of this fraction are colored in?



a	b	c
2	3	5
d		
9		

4 How many parts of this fraction are colored in?




a	b	c
2	9	8
d		
5		

5 How many parts of this fraction are colored in?



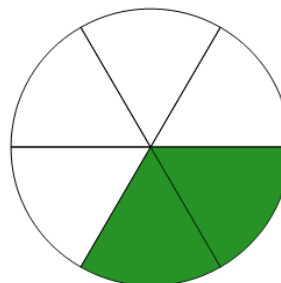
a	b	c
9	1	8
d		
4		

6 How many parts of this fraction are colored in?



a	b	c
3	2	7
d		
8		

7 How many parts of this fraction are colored in?



a	b	c
2	4	6
d		
3		