




Math worksheet on 'Fraction Concept Intro - Improper Numerator to Picture, Mixed Fraction (Level 1)'. Part of a broader unit on 'Fraction Foundations - Practice'

Learn online: app.mobius.academy/math/units/fractions_foundations_practice/


1 Which image shows the correct pizzas?

8 total slices

a



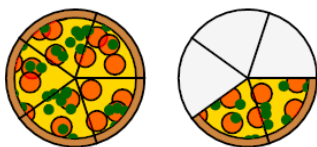
b



2 Which image shows the correct pizzas?

7 total slices

a



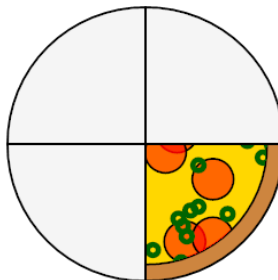
b



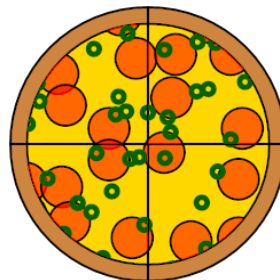
3 Which image shows the correct pizzas?

1 total slices

a



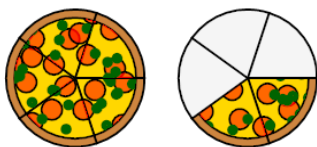
b




4 Which image shows the correct pizzas?

4 total slices

a



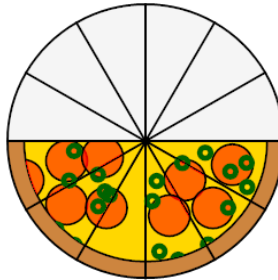
b



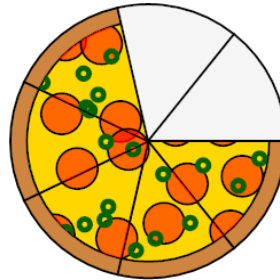
5 Which image shows the correct pizzas?

5 total slices

a



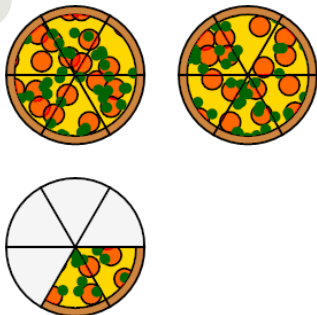
b



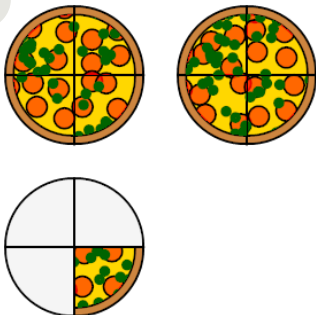
6 Which image shows the correct pizzas?

9 total slices

a



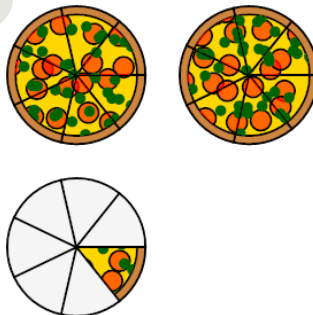
b



7 Which image shows the correct pizzas?

15 total slices

a



b

