



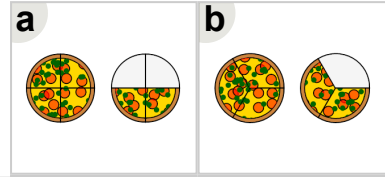
Math worksheet on 'Fraction Concept Intro - Fraction to Picture, Mixed Fraction (Level 1)'. Part of a broader unit on 'Fraction Foundations - Practice'

Learn online: app.mobius.academy/math/units/fractions_foundations_practice/

1

$$1\frac{2}{4}$$

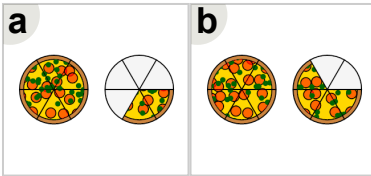
Which image shows this many pizzas?



2

$$1\frac{4}{6}$$

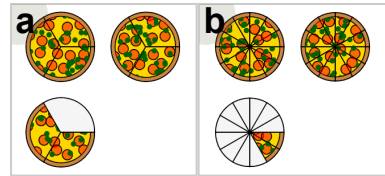
Which image shows this many pizzas?



3

$$2\frac{2}{3}$$

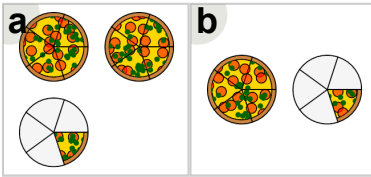
Which image shows this many pizzas?



4

$$1\frac{1}{5}$$

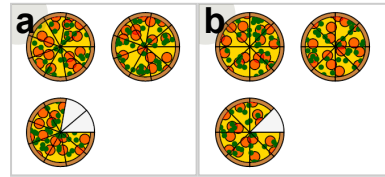
Which image shows this many pizzas?



5

$$2\frac{7}{8}$$

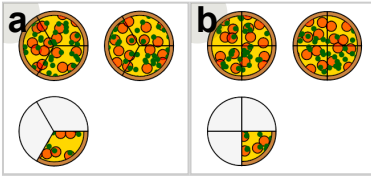
Which image shows this many pizzas?



6

$$2\frac{1}{3}$$

Which image shows this many pizzas?



7

$$1\frac{3}{5}$$

Which image shows this many pizzas?

