



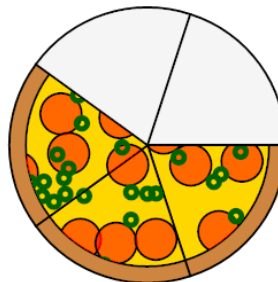
Math worksheet on 'Fraction Concept Intro - Description to Picture, Mixed Fraction (Level 1)'. Part of a broader unit on 'Fraction Foundations - Practice'

Learn online: app.mobius.academy/math/units/fractions_foundations_practice/

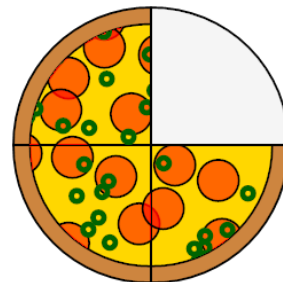
1 Which image shows the correct pizza?

3 slices out of 4 in a full pizza

a




b



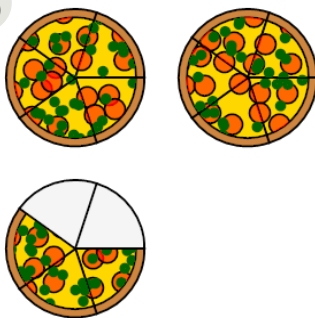
2 Which image shows the correct pizza?

3 slices out of 5 in a full pizza

a



b



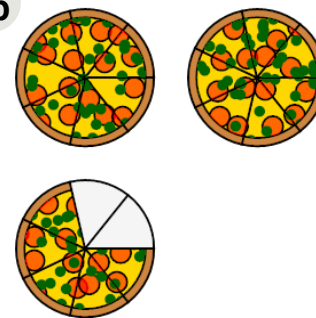
3 Which image shows the correct pizza?

5 slices out of 7 in a full pizza

a



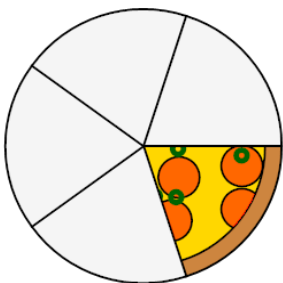
b



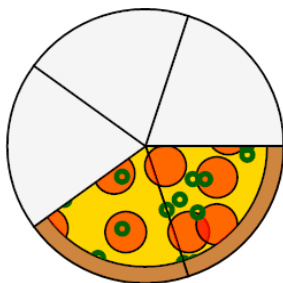
4 Which image shows the correct pizza?

1 slices out of 5 in a full pizza

a



b




5 Which image shows the correct pizza?

4 slices out of 8 in a full pizza

a



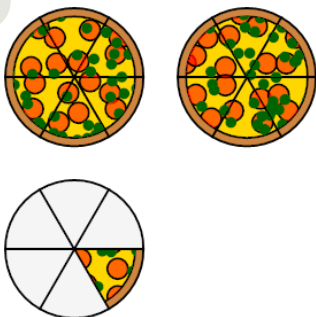
b



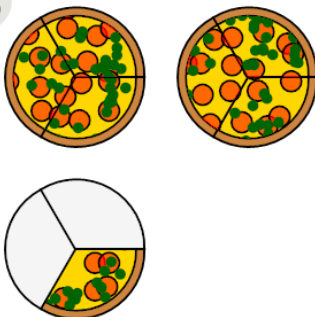
6 Which image shows the correct pizza?

1 slices out of 6 in a full pizza

a



b



7 Which image shows the correct pizza?

4 slices out of 5 in a full pizza

a



b

