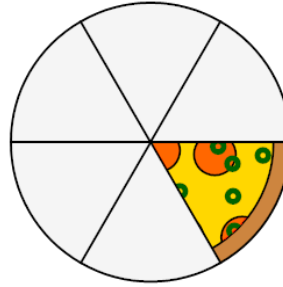




Math worksheet on 'Fraction Concept Intro - Picture to Improper Numerator, Mixed Fraction (Level 1)'.  
Part of a broader unit on 'Fractions - Mixed - Intro'

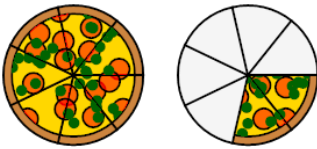
Learn online: [app.mobius.academy/math/units/fractions\\_intro/](http://app.mobius.academy/math/units/fractions_intro/)

1 How many slices are there in all pizzas?



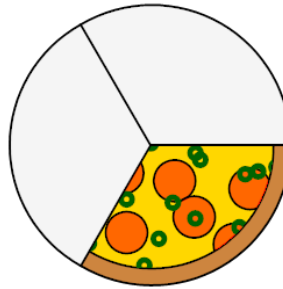
a	b	c
1	3	4
d		
5		

2 How many slices are there in all pizzas?



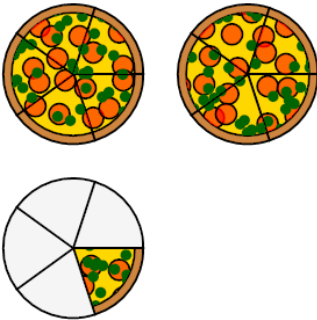
a	b	c
6	11	9
d	e	f
5	7	4

3 How many slices are there in all pizzas?



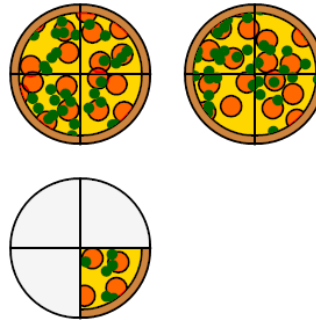
a	b	c
5	3	1
d		
4		

4 How many slices are there in all pizzas?



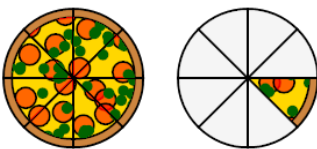
a	b	c
6	7	8
d	e	f
9	15	11

5 How many slices are there in all pizzas?



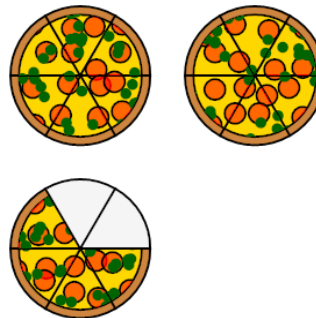
a	b	c
13	7	12
d	e	f
9	5	6

6 How many slices are there in all pizzas?



a	b	c
6	5	7
d	e	
9	4	

7 How many slices are there in all pizzas?



a	b	c
16	11	13
d	e	
19	20	