




Math worksheet on 'Fraction Concept Intro - Remaining Numerator to Picture, Mixed Fraction (Level 1)'. Part of a broader unit on 'Fractions - Mixed - Intro'

Learn online: [app.mobius.academy/math/units/fractions\\_intro/](http://app.mobius.academy/math/units/fractions_intro/)

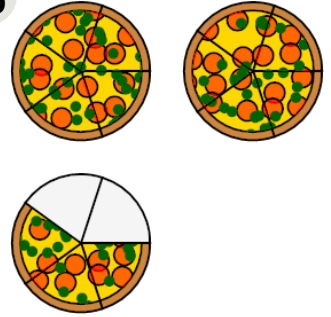
1 Which image shows the correct pizzas?

3 slices in the PARTIAL pizza

a



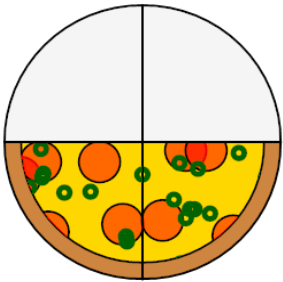
b



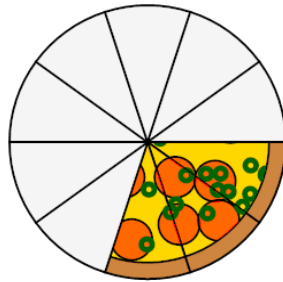
2 Which image shows the correct pizzas?

2 slices in the PARTIAL pizza

a




b



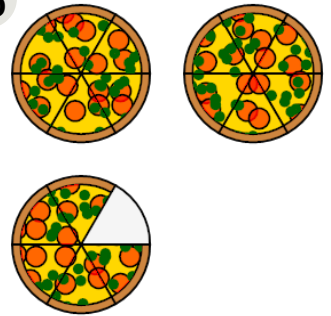
3 Which image shows the correct pizzas?

5 slices in the PARTIAL pizza

a



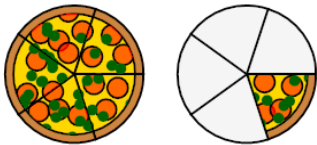
b



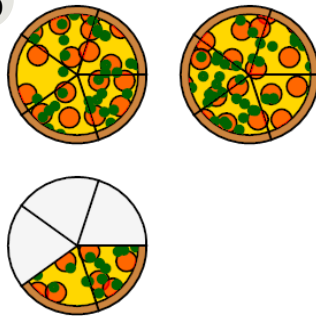
4 Which image shows the correct pizzas?

1 slices in the PARTIAL pizza

a



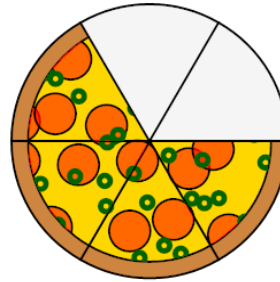
b



5 Which image shows the correct pizzas?

4 slices in the PARTIAL pizza

a



b

