



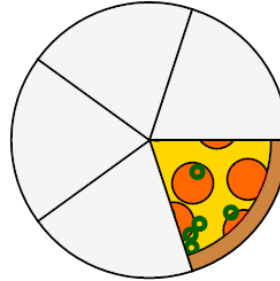
Math worksheet on 'Fraction Concept Intro - Denominator to Picture, Simple Fraction (Level 1)'.  
Part of a broader unit on 'Fraction Foundations - Intro'

Learn online: [app.mobius.academy/math/units/fractions\\_foundations\\_intro/](http://app.mobius.academy/math/units/fractions_foundations_intro/)

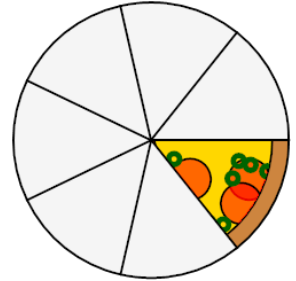
1 Which image shows the correct pizza?

pizza where a WHOLE has 5 slices

a



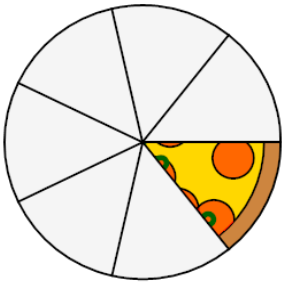
b



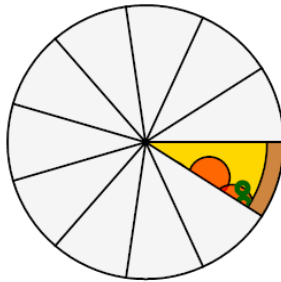
2 Which image shows the correct pizza?

pizza where a WHOLE has 7 slices

a



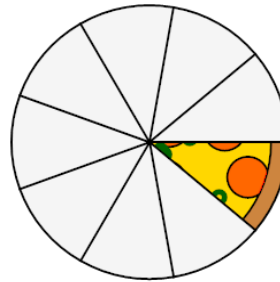
b



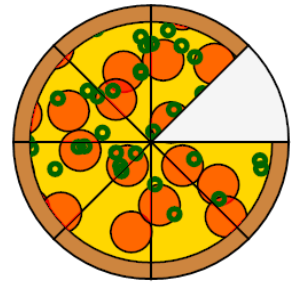
3 Which image shows the correct pizza?

pizza where a WHOLE has 8 slices

a



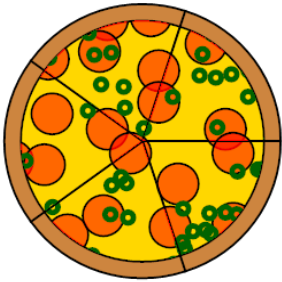
b



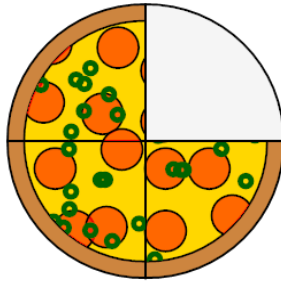
4 Which image shows the correct pizza?

pizza where a WHOLE has 4 slices

a



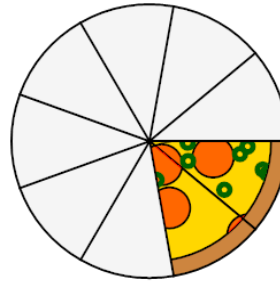
b



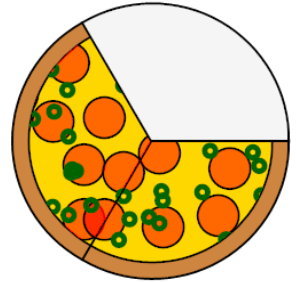
5 Which image shows the correct pizza?

pizza where a WHOLE has 3 slices

a



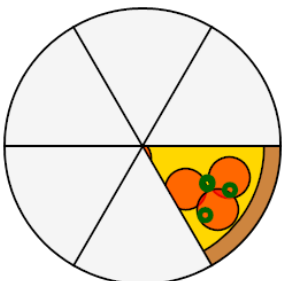
b



6 Which image shows the correct pizza?

pizza where a WHOLE has 6 slices

a



b

