



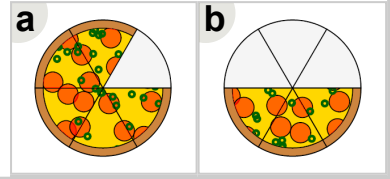
Math worksheet on 'Fraction Concept Intro - Fraction to Picture, Simple Fraction (Level 1)'. Part of a broader unit on 'Fraction Foundations - Intro'

Learn online: [app.mobius.academy/math/units/fractions\\_foundations\\_intro/](http://app.mobius.academy/math/units/fractions_foundations_intro/)

1

$\frac{3}{6}$

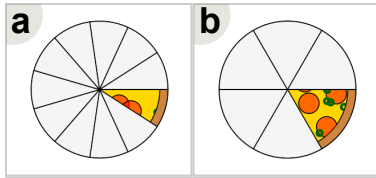
Which image shows this much of a pizza?



2

$\frac{1}{6}$

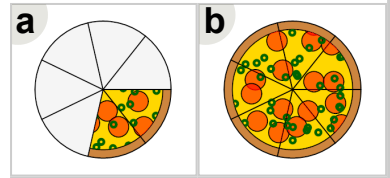
Which image shows this much of a pizza?



3

$\frac{2}{7}$

Which image shows this much of a pizza?



4

$\frac{4}{5}$

Which image shows this much of a pizza?