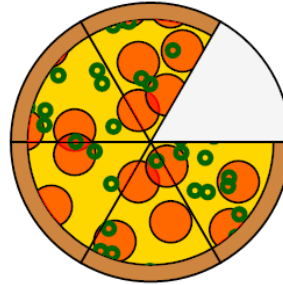




Math worksheet on 'Fraction Concept Intro - Picture to Denominator, Simple Fraction (Level 1)'. Part of a broader unit on 'Fraction Foundations - Intro'

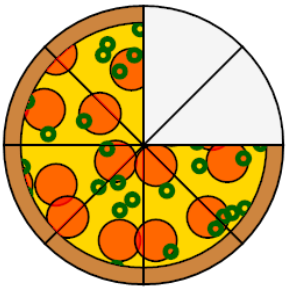
Learn online: app.mobius.academy/math/units/fractions_foundations_intro/

1 How many slices in a FULL pizza?



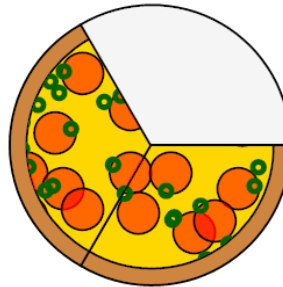
a	b	c
6	4	3
d		
1		

2 How many slices in a FULL pizza?



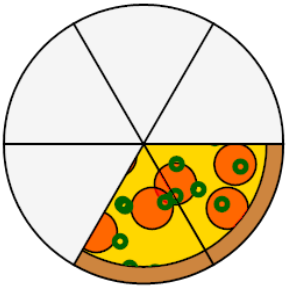
a	b	c
8	12	5
d	e	f
11	3	4

3 How many slices in a FULL pizza?



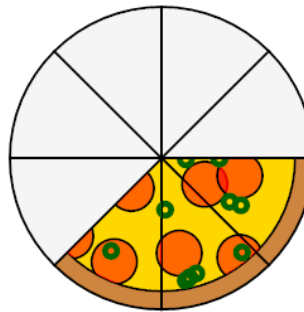
a	b	c
3	5	1
d		
0		

4 How many slices in a FULL pizza?



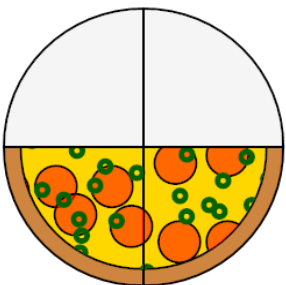
a	b	c
4	10	1
d	e	
6	3	

5 How many slices in a FULL pizza?



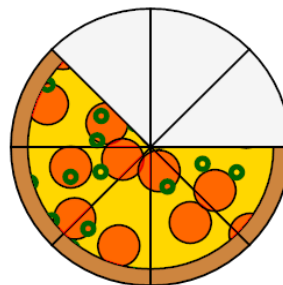
a	b
10	8

6 How many slices in a FULL pizza?



a	b	c
6	2	7
d	e	f
4	1	0

7 How many slices in a FULL pizza?



a	b	c
12	5	4
d	e	f
3	8	10