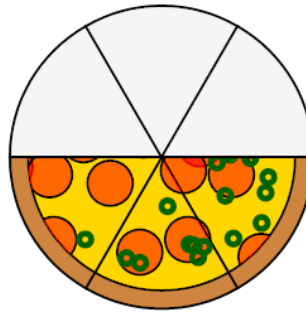




Math worksheet on 'Fraction Concept Intro - Picture to Description, Simple Fraction (Level 1)'. Part of a broader unit on 'Fraction Foundations - Intro'

Learn online: [app.mobius.academy/math/units/fractions\\_foundations\\_intro/](http://app.mobius.academy/math/units/fractions_foundations_intro/)

1

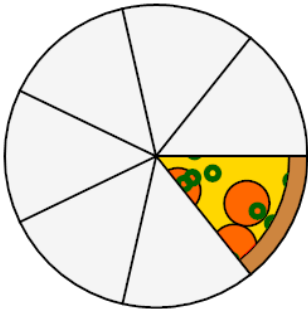


How would you describe the number of slices compared to a full pizza?

**a** 3 slices out of 6

**b** 2 slices out of 6

2

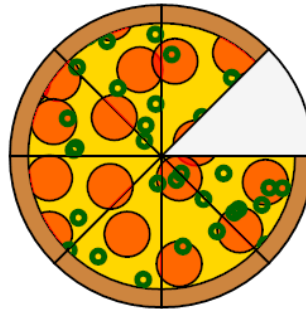


How would you describe the number of slices compared to a full pizza?

**a** 1 slices out of 7

**b** 1 slices out of 3

3

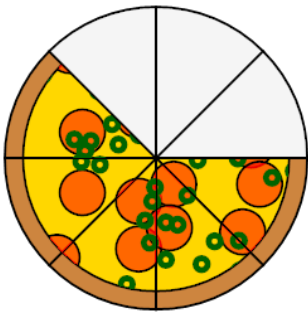


How would you describe the number of slices compared to a full pizza?

**a** 7 slices out of 8

**b** 14 slices out of 8

4

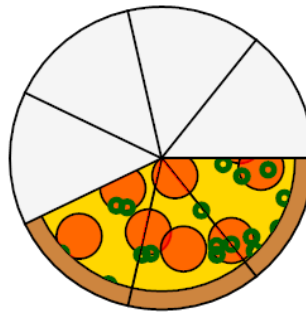


How would you describe the number of slices compared to a full pizza?

**a** 5 slices out of 16

**b** 5 slices out of 8

5

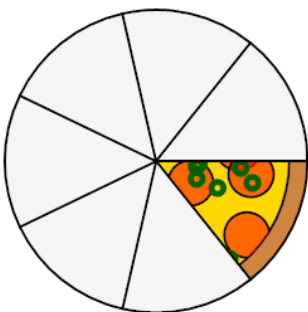


How would you describe the number of slices compared to a full pizza?

**a** 3 slices out of 7

**b** 3 slices out of 2

6

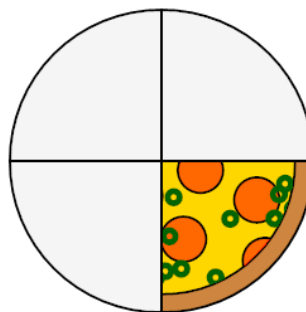


How would you describe the number of slices compared to a full pizza?

**a** 1 slices out of 7

**b** 8 slices out of 7

7



How would you describe the number of slices compared to a full pizza?

**a** 1 slices out of 4

**b** 1 slices out of 7