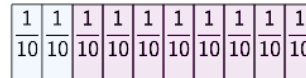




Math worksheet on 'Fraction Strips - Two Strips, One Shaded to One Strip Shaded (Level 1)'. Part of a broader unit on 'Fractions, Equivalent - Intro'

Learn online: app.mobius.academy/math/units/fractions_equivalent_intro/

1



Which fraction strip of fifths is the same length as 2/10?




a

b

2



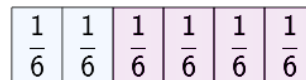
Which fraction strip of quarters is the same length as 9/12?




a

b

3




Which fraction strip of thirds is the same length as 2/6?



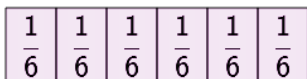
a

b

4




Which fraction strip of sixths is the same length as 1/3?



a

b

5



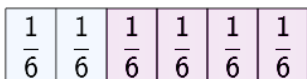
Which fraction strip of ninths is the same length as 1/3?




a

b

6




Which fraction strip of thirds is the same length as 2/6?



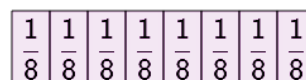
a

b

7



Which fraction strip of eighths is the same length as 1/4?



a

b