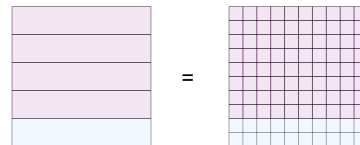




Math worksheet on 'Fraction to Decimals - To Hundredths Decimal (filled Placeholder) - Concept Intro (Level 1)'. Part of a broader unit on 'Fractions and Decimals'

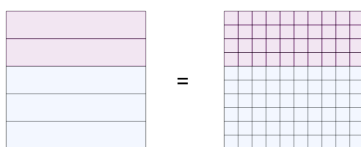
Learn online: [app.mobius.academy/math/units/fractions\\_and\\_decimals/](http://app.mobius.academy/math/units/fractions_and_decimals/)

**1** What decimal in hundredths is equivalent to  $\frac{1}{5}$ ?



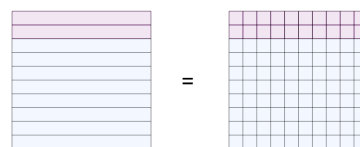
- |          |          |          |          |
|----------|----------|----------|----------|
| <b>a</b> | <b>b</b> | <b>c</b> | <b>d</b> |
| 0.39     | 0.20     | 0.58     | 0.96     |

**2** What decimal in hundredths is equivalent to  $\frac{3}{5}$ ?



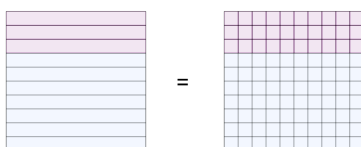
- |          |          |          |          |
|----------|----------|----------|----------|
| <b>a</b> | <b>b</b> | <b>c</b> | <b>d</b> |
| 0.60     | 0.24     | 0.47     | 0.03     |

**3** What decimal in hundredths is equivalent to  $\frac{8}{10}$ ?



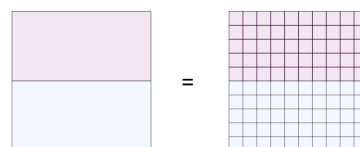
- |          |          |          |          |
|----------|----------|----------|----------|
| <b>a</b> | <b>b</b> | <b>c</b> | <b>d</b> |
| 0.84     | 0.87     | 0.80     | 0.82     |

**4** What decimal in hundredths is equivalent to  $\frac{7}{10}$ ?



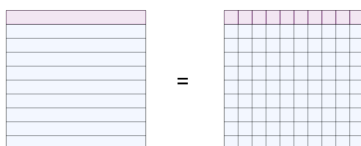
- |          |          |          |          |
|----------|----------|----------|----------|
| <b>a</b> | <b>b</b> | <b>c</b> | <b>d</b> |
| 0.58     | 0.37     | 0.70     | 0.82     |

**5** What decimal in hundredths is equivalent to  $\frac{1}{2}$ ?



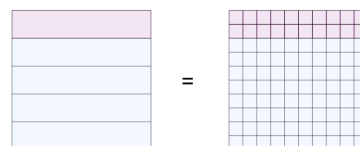
- |          |          |          |          |
|----------|----------|----------|----------|
| <b>a</b> | <b>b</b> | <b>c</b> | <b>d</b> |
| 0.23     | 0.50     | 0.79     | 0.27     |

**6** What decimal in hundredths is equivalent to  $\frac{9}{10}$ ?



- |          |          |          |          |
|----------|----------|----------|----------|
| <b>a</b> | <b>b</b> | <b>c</b> | <b>d</b> |
| 0.82     | 0.90     | 0.31     | 0.74     |

**7** What decimal in hundredths is equivalent to  $\frac{4}{5}$ ?



- |          |          |          |          |
|----------|----------|----------|----------|
| <b>a</b> | <b>b</b> | <b>c</b> | <b>d</b> |
| 0.10     | 0.48     | 0.80     | 0.50     |