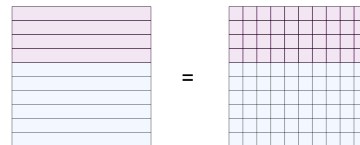




Math worksheet on 'Fraction to Decimals - To Hundredths Fraction (filled Placeholder) - Concept Intro (Level 1)'. Part of a broader unit on 'Fractions and Decimals'

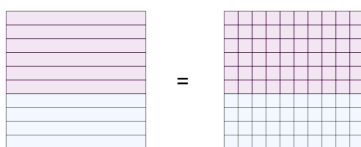
Learn online: app.mobius.academy/math/units/fractions_and_decimals/

1 What fraction in hundredths is equivalent to $\frac{6}{10}$?



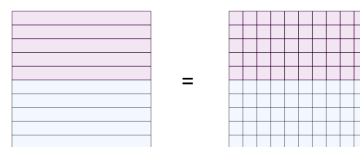
- | | | | |
|--------------------|--------------------|--------------------|--------------------|
| a $\frac{69}{100}$ | b $\frac{79}{100}$ | c $\frac{13}{100}$ | d $\frac{60}{100}$ |
|--------------------|--------------------|--------------------|--------------------|

2 What fraction in hundredths is equivalent to $\frac{4}{10}$?



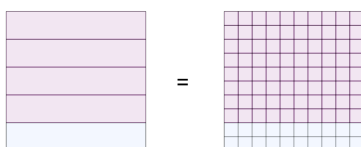
- | | | | |
|--------------------|--------------------|--------------------|--------------------|
| a $\frac{65}{100}$ | b $\frac{43}{100}$ | c $\frac{21}{100}$ | d $\frac{40}{100}$ |
|--------------------|--------------------|--------------------|--------------------|

3 What fraction in hundredths is equivalent to $\frac{5}{10}$?



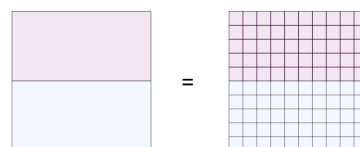
- | | | | |
|--------------------|--------------------|--------------------|--------------------|
| a $\frac{17}{100}$ | b $\frac{50}{100}$ | c $\frac{11}{100}$ | d $\frac{78}{100}$ |
|--------------------|--------------------|--------------------|--------------------|

4 What fraction in hundredths is equivalent to $\frac{1}{5}$?



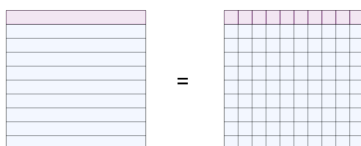
- | | | | |
|--------------------|--------------------|--------------------|--------------------|
| a $\frac{85}{100}$ | b $\frac{22}{100}$ | c $\frac{60}{100}$ | d $\frac{20}{100}$ |
|--------------------|--------------------|--------------------|--------------------|

5 What fraction in hundredths is equivalent to $\frac{1}{2}$?



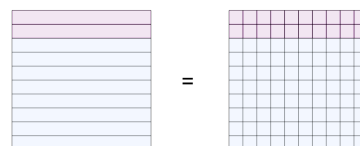
- | | | | |
|--------------------|--------------------|--------------------|--------------------|
| a $\frac{30}{100}$ | b $\frac{50}{100}$ | c $\frac{70}{100}$ | d $\frac{83}{100}$ |
|--------------------|--------------------|--------------------|--------------------|

6 What fraction in hundredths is equivalent to $\frac{9}{10}$?



- | | | | |
|--------------------|--------------------|--------------------|--------------------|
| a $\frac{49}{100}$ | b $\frac{47}{100}$ | c $\frac{90}{100}$ | d $\frac{73}{100}$ |
|--------------------|--------------------|--------------------|--------------------|

7 What fraction in hundredths is equivalent to $\frac{8}{10}$?



- | | | | |
|--------------------|--------------------|--------------------|--------------------|
| a $\frac{45}{100}$ | b $\frac{32}{100}$ | c $\frac{80}{100}$ | d $\frac{31}{100}$ |
|--------------------|--------------------|--------------------|--------------------|