



Math worksheet on 'Fraction to Decimals - To Hundredths Fraction (filled Placeholder) - Concept Intro (Level 2)'. Part of a broader unit on 'Fractions and Decimals'

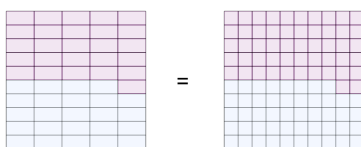
Learn online: [app.mobius.academy/math/units/fractions\\_and\\_decimals/](http://app.mobius.academy/math/units/fractions_and_decimals/)

1 What fraction in hundredths is equivalent to  $1/10$ ?



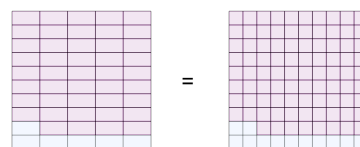
- |                    |                    |                    |                    |
|--------------------|--------------------|--------------------|--------------------|
| a $\frac{27}{100}$ | b $\frac{10}{100}$ | c $\frac{95}{100}$ | d $\frac{60}{100}$ |
|--------------------|--------------------|--------------------|--------------------|

2 What fraction in hundredths is equivalent to  $24/50$ ?



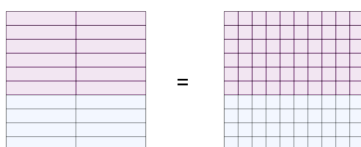
- |                    |                    |                    |                    |
|--------------------|--------------------|--------------------|--------------------|
| a $\frac{91}{100}$ | b $\frac{85}{100}$ | c $\frac{15}{100}$ | d $\frac{48}{100}$ |
|--------------------|--------------------|--------------------|--------------------|

3 What fraction in hundredths is equivalent to  $6/50$ ?



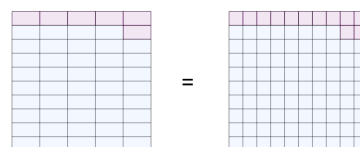
- |                    |                    |                    |                    |
|--------------------|--------------------|--------------------|--------------------|
| a $\frac{12}{100}$ | b $\frac{50}{100}$ | c $\frac{55}{100}$ | d $\frac{93}{100}$ |
|--------------------|--------------------|--------------------|--------------------|

4 What fraction in hundredths is equivalent to  $8/20$ ?



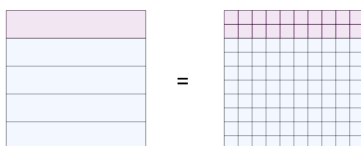
- |                    |                    |                    |                    |
|--------------------|--------------------|--------------------|--------------------|
| a $\frac{37}{100}$ | b $\frac{21}{100}$ | c $\frac{40}{100}$ | d $\frac{44}{100}$ |
|--------------------|--------------------|--------------------|--------------------|

5 What fraction in hundredths is equivalent to  $44/50$ ?



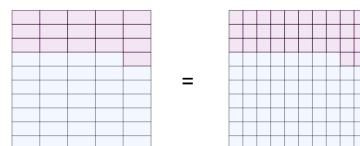
- |                    |                    |                    |                    |
|--------------------|--------------------|--------------------|--------------------|
| a $\frac{84}{100}$ | b $\frac{88}{100}$ | c $\frac{75}{100}$ | d $\frac{38}{100}$ |
|--------------------|--------------------|--------------------|--------------------|

6 What fraction in hundredths is equivalent to  $4/5$ ?



- |                    |                    |                    |                    |
|--------------------|--------------------|--------------------|--------------------|
| a $\frac{80}{100}$ | b $\frac{39}{100}$ | c $\frac{47}{100}$ | d $\frac{64}{100}$ |
|--------------------|--------------------|--------------------|--------------------|

7 What fraction in hundredths is equivalent to  $34/50$ ?



- |                    |                    |                    |                    |
|--------------------|--------------------|--------------------|--------------------|
| a $\frac{94}{100}$ | b $\frac{68}{100}$ | c $\frac{45}{100}$ | d $\frac{43}{100}$ |
|--------------------|--------------------|--------------------|--------------------|