

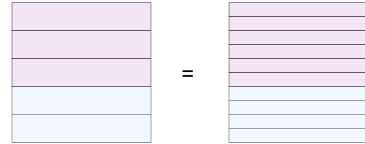


Math worksheet on 'Fraction to Decimals - To Tenths Decimal (filled Placeholder) - Concept Intro (Level 1)'. Part of a broader unit on 'Fractions and Decimals'

Learn online: app.mobius.academy/math/units/fractions_and_decimals/

1

What decimal in tenths is equivalent to $\frac{2}{5}$?



a

0.7

b

0.4

c

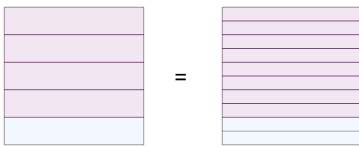
0.8

d

0.9

2

What decimal in tenths is equivalent to $\frac{1}{5}$?



a

0.8

b

0.5

c

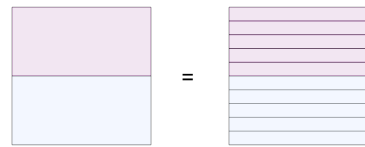
0.9

d

0.2

3

What decimal in tenths is equivalent to $\frac{1}{2}$?



a

0.2

b

0.9

c

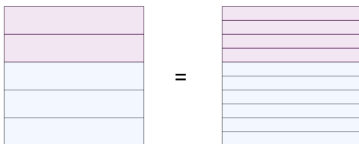
0.5

d

0.8

4

What decimal in tenths is equivalent to $\frac{3}{5}$?



a

0.1

b

0.6

c

0.2

d

0.3