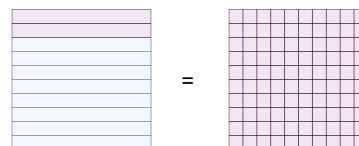




Math worksheet on 'Fraction to Decimals - To Hundredths Decimal (with Placeholder) - Concept Intro (Level 1)'. Part of a broader unit on 'Fractions and Decimals'

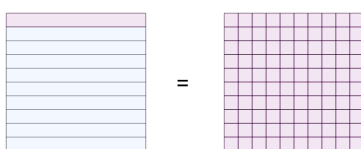
Learn online: app.mobius.academy/math/units/fractions_and_decimals/

1 What decimal in hundredths is equivalent to $8/10$?



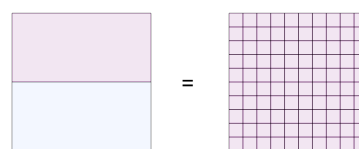
- | | | | |
|----------|----------|----------|----------|
| a | b | c | d |
| 0.38 | 0.80 | 0.76 | 0.32 |

2 What decimal in hundredths is equivalent to $9/10$?



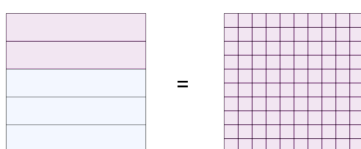
- | | | | |
|----------|----------|----------|----------|
| a | b | c | d |
| 0.04 | 0.64 | 0.90 | 0.61 |

3 What decimal in hundredths is equivalent to $1/2$?



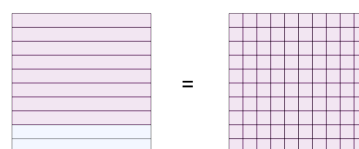
- | | | | |
|----------|----------|----------|----------|
| a | b | c | d |
| 0.03 | 0.50 | 0.80 | 0.67 |

4 What decimal in hundredths is equivalent to $3/5$?



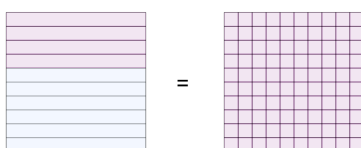
- | | | | |
|----------|----------|----------|----------|
| a | b | c | d |
| 0.60 | 0.22 | 0.32 | 0.54 |

5 What decimal in hundredths is equivalent to $2/10$?



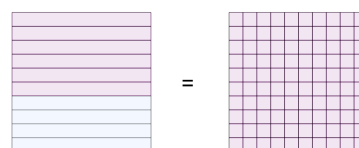
- | | | | |
|----------|----------|----------|----------|
| a | b | c | d |
| 0.25 | 0.57 | 0.96 | 0.20 |

6 What decimal in hundredths is equivalent to $6/10$?



- | | | | |
|----------|----------|----------|----------|
| a | b | c | d |
| 0.60 | 0.14 | 0.12 | 0.67 |

7 What decimal in hundredths is equivalent to $4/10$?



- | | | | |
|----------|----------|----------|----------|
| a | b | c | d |
| 0.01 | 0.76 | 0.63 | 0.40 |