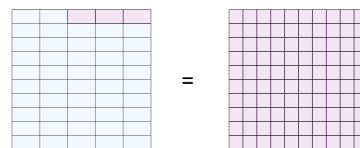




Math worksheet on 'Fraction to Decimals - To Hundredths Decimal (with Placeholder) - Concept Intro (Level 2)'. Part of a broader unit on 'Fractions and Decimals'

Learn online: app.mobius.academy/math/units/fractions_and_decimals/

1 What decimal in hundredths is equivalent to $47/50$?



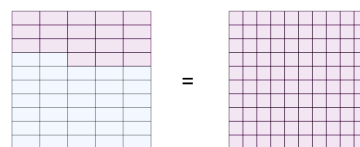
- | | | | |
|----------|----------|----------|----------|
| a | b | c | d |
| 0.67 | 0.94 | 0.49 | 0.41 |

2 What decimal in hundredths is equivalent to $3/4$?



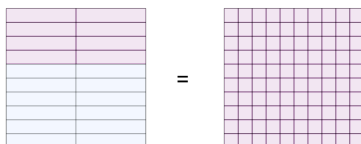
- | | | | |
|----------|----------|----------|----------|
| a | b | c | d |
| 0.75 | 0.89 | 0.01 | 0.05 |

3 What decimal in hundredths is equivalent to $32/50$?



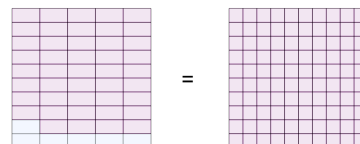
- | | | | |
|----------|----------|----------|----------|
| a | b | c | d |
| 0.64 | 0.13 | 0.08 | 0.22 |

4 What decimal in hundredths is equivalent to $12/20$?



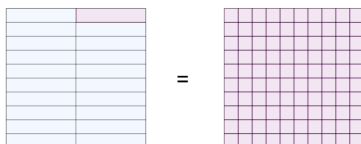
- | | | | |
|----------|----------|----------|----------|
| a | b | c | d |
| 0.93 | 0.57 | 0.63 | 0.60 |

5 What decimal in hundredths is equivalent to $6/50$?



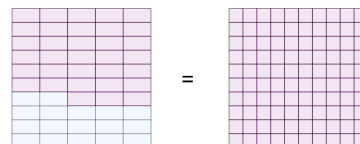
- | | | | |
|----------|----------|----------|----------|
| a | b | c | d |
| 0.54 | 0.12 | 0.18 | 0.97 |

6 What decimal in hundredths is equivalent to $19/20$?



- | | | | |
|----------|----------|----------|----------|
| a | b | c | d |
| 0.80 | 0.98 | 0.63 | 0.95 |

7 What decimal in hundredths is equivalent to $17/50$?



- | | | | |
|----------|----------|----------|----------|
| a | b | c | d |
| 0.34 | 0.41 | 0.87 | 0.72 |