



Math worksheet on 'Fraction to Decimals - To Hundredths Fraction (with Placeholder) - Concept Intro (Level 2)'. Part of a broader unit on 'Fractions and Decimals'

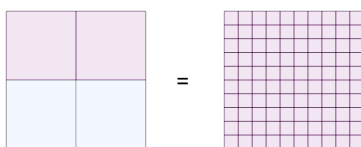
Learn online: app.mobius.academy/math/units/fractions_and_decimals/

1 What fraction in hundredths is equivalent to $\frac{7}{20}$?



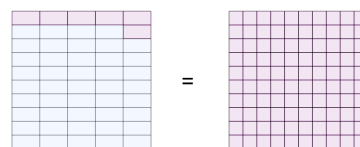
- | | | | |
|--------------------|--------------------|--------------------|--------------------|
| a $\frac{91}{100}$ | b $\frac{94}{100}$ | c $\frac{17}{100}$ | d $\frac{35}{100}$ |
|--------------------|--------------------|--------------------|--------------------|

2 What fraction in hundredths is equivalent to $\frac{2}{4}$?



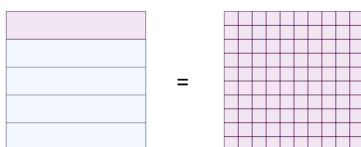
- | | | | |
|--------------------|--------------------|--------------------|--------------------|
| a $\frac{16}{100}$ | b $\frac{86}{100}$ | c $\frac{50}{100}$ | d $\frac{34}{100}$ |
|--------------------|--------------------|--------------------|--------------------|

3 What fraction in hundredths is equivalent to $\frac{44}{50}$?



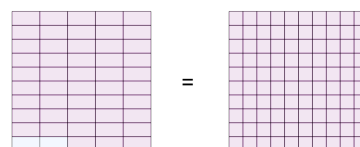
- | | | | |
|--------------------|--------------------|--------------------|--------------------|
| a $\frac{14}{100}$ | b $\frac{88}{100}$ | c $\frac{82}{100}$ | d $\frac{63}{100}$ |
|--------------------|--------------------|--------------------|--------------------|

4 What fraction in hundredths is equivalent to $\frac{4}{5}$?



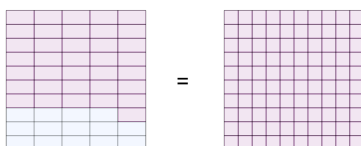
- | | | | |
|--------------------|--------------------|--------------------|--------------------|
| a $\frac{80}{100}$ | b $\frac{57}{100}$ | c $\frac{32}{100}$ | d $\frac{76}{100}$ |
|--------------------|--------------------|--------------------|--------------------|

5 What fraction in hundredths is equivalent to $\frac{2}{50}$?



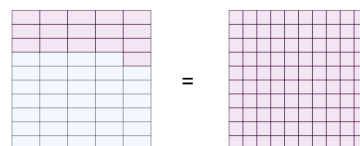
- | | | | |
|--------------------|-------------------|--------------------|-------------------|
| a $\frac{25}{100}$ | b $\frac{2}{100}$ | c $\frac{87}{100}$ | d $\frac{4}{100}$ |
|--------------------|-------------------|--------------------|-------------------|

6 What fraction in hundredths is equivalent to $\frac{14}{50}$?



- | | | | |
|--------------------|--------------------|--------------------|--------------------|
| a $\frac{34}{100}$ | b $\frac{28}{100}$ | c $\frac{53}{100}$ | d $\frac{50}{100}$ |
|--------------------|--------------------|--------------------|--------------------|

7 What fraction in hundredths is equivalent to $\frac{34}{50}$?



- | | | | |
|--------------------|--------------------|--------------------|--------------------|
| a $\frac{68}{100}$ | b $\frac{34}{100}$ | c $\frac{56}{100}$ | d $\frac{83}{100}$ |
|--------------------|--------------------|--------------------|--------------------|