




Math worksheet on 'Fraction to Decimals - To Hundredths Decimal - Concept Intro (Level 1)'. Part of a broader unit on 'Fractions and Decimals'

Learn online: [app.mobius.academy/math/units/fractions\\_and\\_decimals/](http://app.mobius.academy/math/units/fractions_and_decimals/)

**1** What decimal in hundredths is equivalent to  $\frac{8}{10}$ ?



= 0.??

**a**

0.40

**b**

0.82


**c**

0.78

**d**

0.80

**2** What decimal in hundredths is equivalent to  $\frac{1}{2}$ ?



= 0.??

**a**

0.06

**b**

0.20


**c**

0.50

**d**

0.99

**3** What decimal in hundredths is equivalent to  $\frac{4}{5}$ ?



= 0.??

**a**

0.20

**b**

0.49


**c**

0.80

**d**

0.89

**4** What decimal in hundredths is equivalent to  $\frac{5}{10}$ ?



= 0.??

**a**

0.59

**b**

0.50


**c**

0.61

**d**

0.46

**5** What decimal in hundredths is equivalent to  $\frac{7}{10}$ ?



= 0.??

**a**

0.70

**b**

0.94


**c**

0.85

**d**

0.45

**6** What decimal in hundredths is equivalent to  $\frac{9}{10}$ ?



= 0.??

**a**

0.16

**b**

0.90


**c**

0.82

**d**

0.62

**7** What decimal in hundredths is equivalent to  $\frac{1}{5}$ ?



= 0.??

**a**

0.20

**b**

0.98

**c**

0.57

**d**

0.15