




Math worksheet on 'Fraction to Decimals - To Hundredths Fraction - Concept Intro (Level 1)'. Part of a broader unit on 'Fractions and Decimals'


Learn online: [app.mobius.academy/math/units/fractions\\_and\\_decimals/](http://app.mobius.academy/math/units/fractions_and_decimals/)

1 What fraction in hundredths is equivalent to  $\frac{8}{10}$ ?



- |                    |                    |                    |                   |
|--------------------|--------------------|--------------------|-------------------|
| a $\frac{15}{100}$ | b $\frac{80}{100}$ | c $\frac{95}{100}$ | d $\frac{1}{100}$ |
|--------------------|--------------------|--------------------|-------------------|

2 What fraction in hundredths is equivalent to  $\frac{4}{10}$ ?



- |                    |                    |                    |                   |
|--------------------|--------------------|--------------------|-------------------|
| a $\frac{60}{100}$ | b $\frac{83}{100}$ | c $\frac{40}{100}$ | d $\frac{8}{100}$ |
|--------------------|--------------------|--------------------|-------------------|

3 What fraction in hundredths is equivalent to  $\frac{1}{2}$ ?




- |                    |                    |                    |                    |
|--------------------|--------------------|--------------------|--------------------|
| a $\frac{96}{100}$ | b $\frac{27}{100}$ | c $\frac{41}{100}$ | d $\frac{50}{100}$ |
|--------------------|--------------------|--------------------|--------------------|

4 What fraction in hundredths is equivalent to  $\frac{4}{5}$ ?




- |                    |                    |                    |                    |
|--------------------|--------------------|--------------------|--------------------|
| a $\frac{35}{100}$ | b $\frac{12}{100}$ | c $\frac{54}{100}$ | d $\frac{80}{100}$ |
|--------------------|--------------------|--------------------|--------------------|

5 What fraction in hundredths is equivalent to  $\frac{1}{5}$ ?



- |                    |                    |                    |                    |
|--------------------|--------------------|--------------------|--------------------|
| a $\frac{30}{100}$ | b $\frac{71}{100}$ | c $\frac{92}{100}$ | d $\frac{20}{100}$ |
|--------------------|--------------------|--------------------|--------------------|

6 What fraction in hundredths is equivalent to  $\frac{3}{10}$ ?



- |                    |                    |                    |                    |
|--------------------|--------------------|--------------------|--------------------|
| a $\frac{30}{100}$ | b $\frac{80}{100}$ | c $\frac{60}{100}$ | d $\frac{98}{100}$ |
|--------------------|--------------------|--------------------|--------------------|