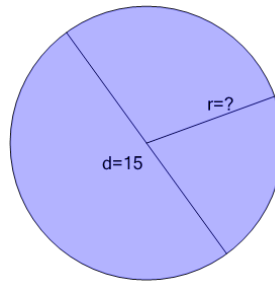




Math worksheet on 'Circles - Find Radius from Diameter (Level 3)'. Part of a broader unit on 'Geometry - Circle Area - Intro'

Learn online: app.mobius.academy/math/units/geometry_circles_area_intro/

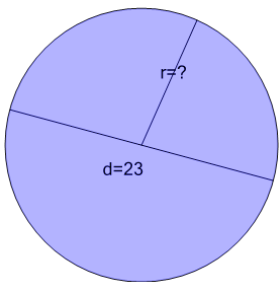
1



Find the radius of the circle that has the given diameter

a	6.5	b	9.5
c	7.5	d	5.5
e	8.5		

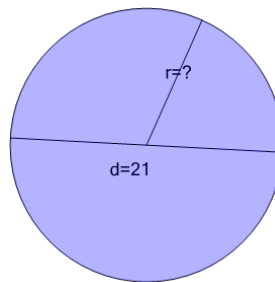
2



Find the radius of the circle that has the given diameter

a	13.5	b	9.5
c	11.5	d	10.5
e	12.5		

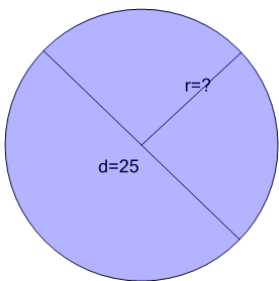
3



Find the radius of the circle that has the given diameter

a	11.5	b	12.5
c	9.5	d	8.5
e	10.5		

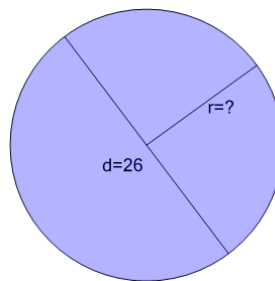
4



Find the radius of the circle that has the given diameter

a	14.5	b	12.5
c	11.5	d	10.5
e	13.5		

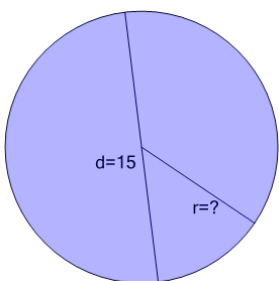
5



Find the radius of the circle that has the given diameter

a	12	b	15
c	13	d	14
e	11		

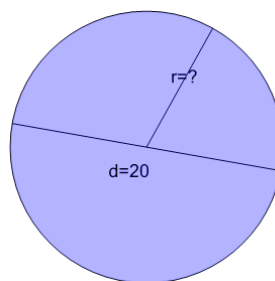
6



Find the radius of the circle that has the given diameter

a	8.5	b	6.5
c	7.5	d	9.5
e	5.5		

7



Find the radius of the circle that has the given diameter

a	8	b	12
c	9	d	10
e	11		