

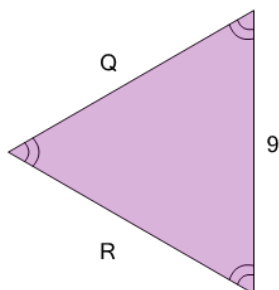


Math worksheet on 'Geometry of Triangles - Equilateral, Solve Side (Level 1)'. Part of a broader unit on 'Geometry - Isosceles and Equilateral Triangles'

Learn online:

app.mobius.academy/math/units/geometry_triangles_isosceles_equilateral_intro/

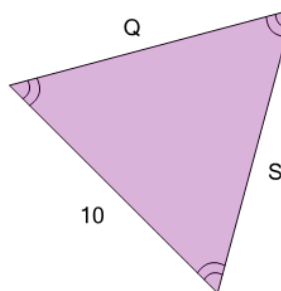
2



What do we know about side 'Q'?

a	11
b	10
c	7
d	9
e	13
f	Unable to answer

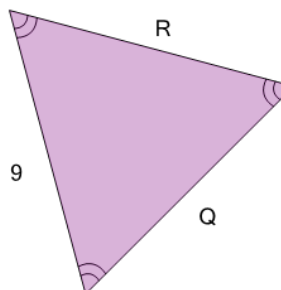
1



What do we know about side 'Q'?

a	12
b	7
c	10
d	Unable to answer
e	8

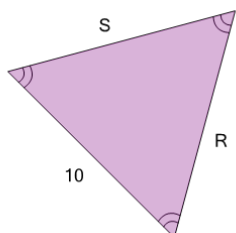
3



What do we know about side 'Q'?

a	9
b	10
c	6
d	Unable to answer
e	11
f	12

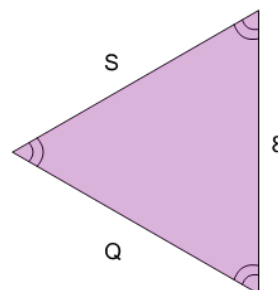
4



What do we know about side 'R'?

a	13	b	14
c	6	d	9
e	10	f	7

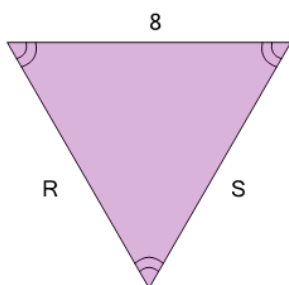
5



What do we know about side 'Q'?

a	Unable to answer
b	7
c	9
d	8
e	10

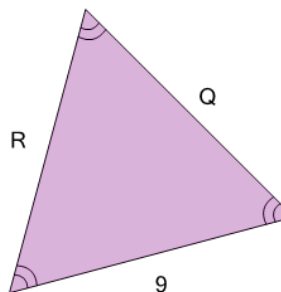
6



What do we know about side 'S'?

a	8
b	4
c	9
d	Unable to answer
e	5

7



What do we know about side 'R'?

a	9
b	6
c	13
d	Unable to answer
e	12