



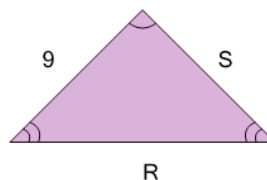
Math worksheet on 'Geometry of Triangles - Isosceles, Solve Side from Double Side (Level 2)'.  
Part of a broader unit on 'Geometry - Isosceles and Equilateral Triangles'

Learn online:

[app.mobius.academy/math/units/geometry\\_triangles\\_isosceles\\_equilateral\\_intro/](http://app.mobius.academy/math/units/geometry_triangles_isosceles_equilateral_intro/)

1

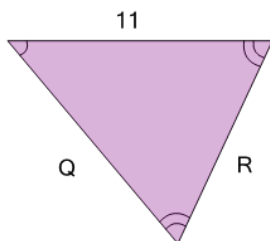
What do we know about side 'S'?



- |   |                  |
|---|------------------|
| a | 9                |
| b | Unable to answer |
| c | 7                |
| d | 8                |
| e | 11               |

2

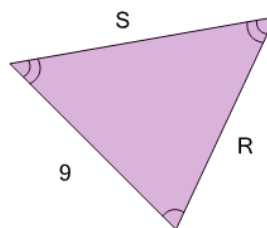
What do we know about side 'R'?



- |   |                  |
|---|------------------|
| a | 11               |
| b | 13               |
| c | Unable to answer |
| d | 7                |
| e | 6                |
| f | 9                |

3

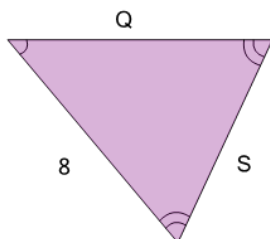
What do we know about side 'R'?



- |   |                  |
|---|------------------|
| a | 10               |
| b | 6                |
| c | Unable to answer |
| d | 7                |
| e | 9                |
| f | 12               |

4

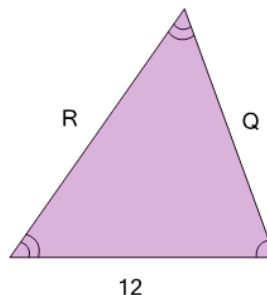
What do we know about side 'S'?



- |   |                  |
|---|------------------|
| a | 3                |
| b | 9                |
| c | Unable to answer |
| d | 6                |
| e | 7                |
| f | 8                |

5

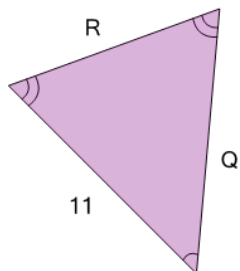
What do we know about side 'Q'?



- |   |                  |
|---|------------------|
| a | 9                |
| b | Unable to answer |
| c | 8                |
| d | 12               |
| e | 15               |

6

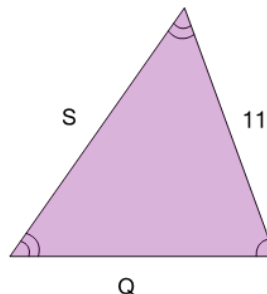
What do we know about side 'Q'?



- |   |                  |
|---|------------------|
| a | 8                |
| b | Unable to answer |
| c | 15               |
| d | 7                |
| e | 11               |
| f | 14               |

7

What do we know about side 'S'?



- |   |                  |
|---|------------------|
| a | 11               |
| b | Unable to answer |
| c | 12               |
| d | 13               |
| e | 16               |