

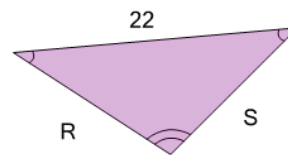


Math worksheet on 'Geometry of Triangles - Scalene, Solve Side (Level 1)'. Part of a broader unit on 'Geometry - Isosceles and Equilateral Triangles'

Learn online:

app.mobius.academy/math/units/geometry_triangles_isosceles_equilateral_intro/

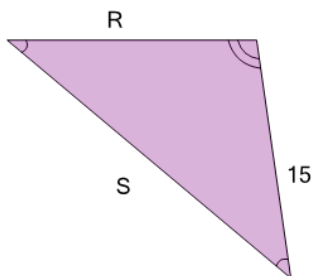
1



What do we know about side 'S'?

- | | |
|---|------------------|
| a | 13 |
| b | 14 |
| c | 11 |
| d | 12 |
| e | Unable to answer |
| f | 22 |

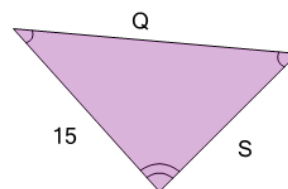
2



What do we know about side 'S'?

- | | |
|---|------------------|
| a | 22 |
| b | 15 |
| c | 23 |
| d | 24 |
| e | Unable to answer |
| f | 21 |

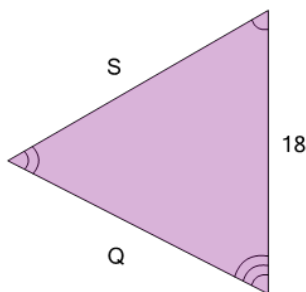
3



What do we know about side 'Q'?

- | | |
|---|------------------|
| a | 18 |
| b | 19 |
| c | 15 |
| d | 20 |
| e | Unable to answer |

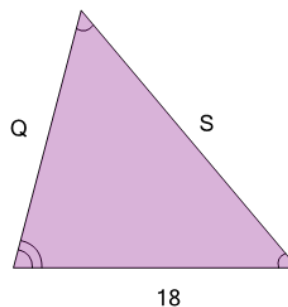
4



What do we know about side 'S'?

- | | |
|---|------------------|
| a | Unable to answer |
| b | 18 |
| c | 20 |
| d | 19 |
| e | 16 |
| f | 15 |

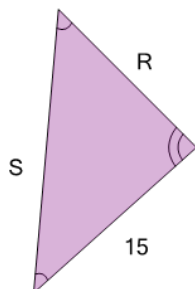
5



What do we know about side 'S'?

- | | |
|---|------------------|
| a | 20 |
| b | Unable to answer |
| c | 23 |
| d | 22 |
| e | 21 |
| f | 18 |

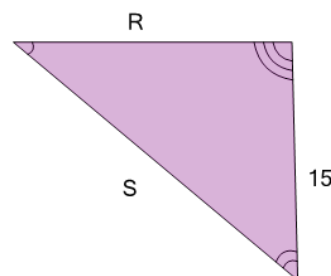
6



What do we know about side 'R'?

- | | |
|---|------------------|
| a | 10 |
| b | 12 |
| c | 15 |
| d | 13 |
| e | Unable to answer |
| f | 11 |

7



What do we know about side 'S'?

- | | |
|---|------------------|
| a | 15 |
| b | 16 |
| c | 19 |
| d | Unable to answer |
| e | 17 |