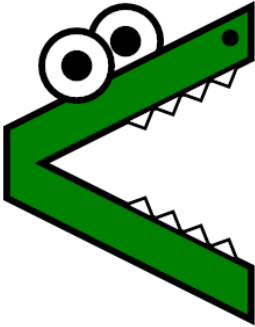




Math worksheet on 'Less Than or Greater Than with Alligators - Alligator to Symbol (Level 1)'. Part of a broader unit on 'Coin Math Comparing - Intro'


Learn online: [app.mobius.academy/math/units/coin\\_math\\_compare\\_intro/](http://app.mobius.academy/math/units/coin_math_compare_intro/)

**1** What math symbol has the same meaning as this alligator?




a	b	c
$<$	$=$	$>$

**2** What math symbol has the same meaning as this alligator?



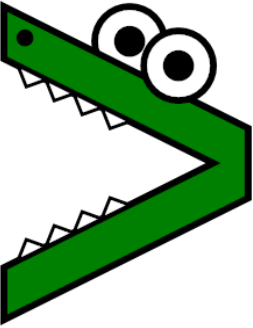
a	b	c
$<$	$=$	$>$

**3** What math symbol has the same meaning as this alligator?



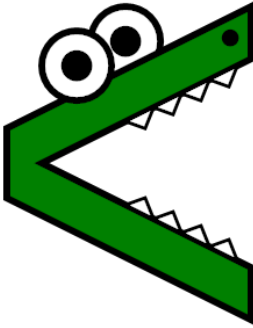
a	b	c
$<$	$=$	$>$

**4** What math symbol has the same meaning as this alligator?




a	b	c
$<$	$=$	$>$

**5** What math symbol has the same meaning as this alligator?




a	b	c
$<$	$=$	$>$

**6** What math symbol has the same meaning as this alligator?



a	b	c
$<$	$=$	$>$

**7** What math symbol has the same meaning as this alligator?



a	b	c
$<$	$=$	$>$