




Math worksheet on 'Less Than or Greater Than with Alligators - Alligator to Word for Symbol (Level 1)'. Part of a broader unit on 'Coin Math Comparing - Intro'


Learn online: app.mobius.academy/math/units/coin_math_compare_intro/

1 What does this alligator mean?




| | |
|----------|--------------|
| a | less than |
| b | equals |
| c | greater than |

2 What does this alligator mean?



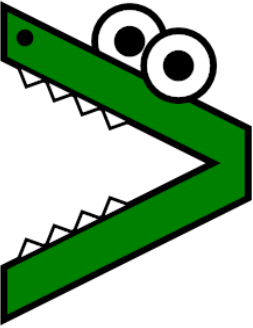
| | |
|----------|--------------|
| a | less than |
| b | equals |
| c | greater than |

3 What does this alligator mean?



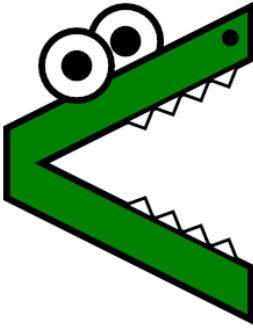
| | |
|----------|--------------|
| a | less than |
| b | equals |
| c | greater than |

4 What does this alligator mean?




| | |
|----------|--------------|
| a | less than |
| b | equals |
| c | greater than |

5 What does this alligator mean?




| | |
|----------|--------------|
| a | less than |
| b | equals |
| c | greater than |

6 What does this alligator mean?



| | |
|----------|--------------|
| a | less than |
| b | equals |
| c | greater than |

7 What does this alligator mean?



| | |
|----------|--------------|
| a | less than |
| b | equals |
| c | greater than |