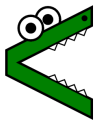


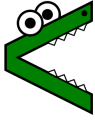

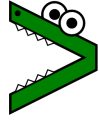


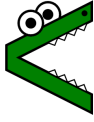



Math worksheet on 'Less Than or Greater Than with Alligators - Symbol to Alligator (Level 1)'. Part of a broader unit on 'Coin Math Comparing - Intro'

Learn online: app.mobius.academy/math/units/coin_math_compare_intro/

<p>1 Which alligator is the same as this math symbol?</p> <p style="text-align: center;">></p>	<p>a</p> 	<p>b</p> 	<p>c</p> 

<p>2 Which alligator is the same as this math symbol?</p> <p style="text-align: center;">=</p>	<p>a</p> 	<p>b</p> 	<p>c</p> 

<p>3 Which alligator is the same as this math symbol?</p> <p style="text-align: center;"><</p>	<p>a</p> 	<p>b</p> 	<p>c</p> 