






Math worksheet on 'Less Than or Greater Than with Alligators - Word for Symbol to Alligator (Level 1)'. Part of a broader unit on 'Coin Math Comparing - Intro'

Learn online: app.mobius.academy/math/units/coin_math_compare_intro/




1 Which alligator is the same as this math symbol?

greater than

a 	b 	c 
---	--	--



2 Which alligator is the same as this math symbol?

equals

a 	b 	c 

3 Which alligator is the same as this math symbol?

less than

a 	b 	c 