




Math worksheet on 'Identify Lines, Segments, and Rays (Level 1)'. Part of a broader unit on 'Geometry Basics - Practice'

Learn online: [app.mobius.academy/math/units/geometry\\_basics\\_practice/](http://app.mobius.academy/math/units/geometry_basics_practice/)


**1** Identify whether this is a line, a segment, or a ray

<b>a</b>	line	<b>b</b>	segment
<b>c</b>	ray		




**2** Identify whether this is a line, a segment, or a ray

<b>a</b>	ray	<b>b</b>	segment
<b>c</b>	line		




**3** Identify whether this is a line, a segment, or a ray

<b>a</b>	ray	<b>b</b>	segment
<b>c</b>	line		




**4** Identify whether this is a line, a segment, or a ray

<b>a</b>	segment	<b>b</b>	ray
<b>c</b>	line		




**5** Identify whether this is a line, a segment, or a ray

<b>a</b>	line	<b>b</b>	segment
<b>c</b>	ray		



**6** Identify whether this is a line, a segment, or a ray

<b>a</b>	line	<b>b</b>	ray
<b>c</b>	segment		



**7** Identify whether this is a line, a segment, or a ray

<b>a</b>	ray	<b>b</b>	line
<b>c</b>	segment		

