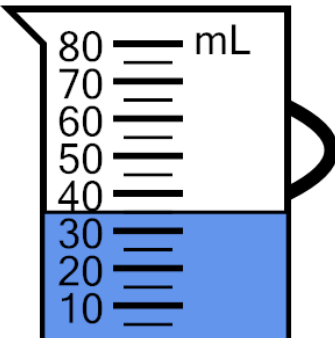




Math worksheet on 'Measure Volume (milliliters) - Fives, Fully Marked (Level 1)'. Part of a broader unit on 'Measurement - Units Intro - Metric'

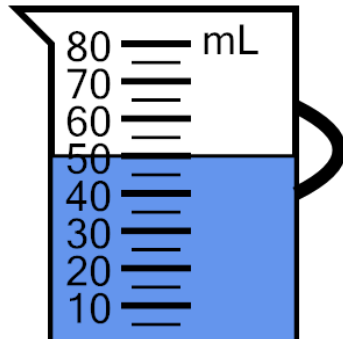
Learn online: app.mobius.academy/math/units/measurement_unit_intro_metric/

1 Measure the volume of water in the measuring cup



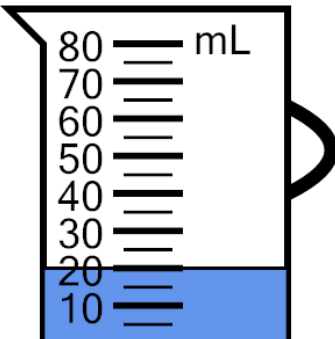
a	b	c
50 mL	60 mL	35 mL
d	e	f
15 mL	25 mL	40 mL

2 Measure the volume of water in the measuring cup



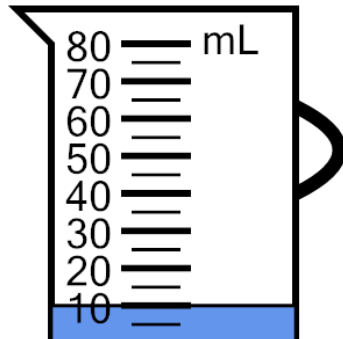
a	b	c
50 mL	60 mL	30 mL
d	e	f
35 mL	65 mL	25 mL

3 Measure the volume of water in the measuring cup



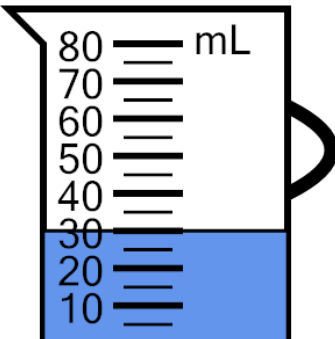
a	b	c
5 mL	30 mL	45 mL
d	e	f
40 mL	0 mL	20 mL

4 Measure the volume of water in the measuring cup



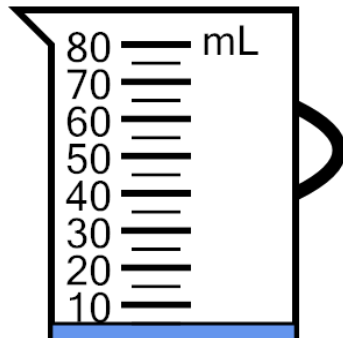
a	b	c
5 mL	35 mL	20 mL
d	e	f
25 mL	10 mL	15 mL

5 Measure the volume of water in the measuring cup



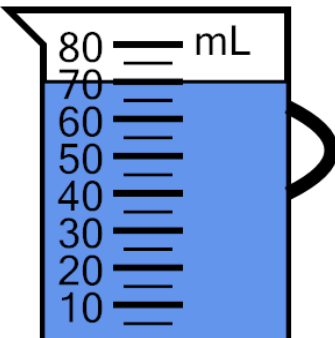
a	b	c
10 mL	50 mL	40 mL
d	e	f
35 mL	30 mL	20 mL

6 Measure the volume of water in the measuring cup



a	b	c
0 mL	10 mL	25 mL
d	e	f
20 mL	15 mL	5 mL

7 Measure the volume of water in the measuring cup



a	b	c
90 mL	50 mL	65 mL
d	e	f
80 mL	95 mL	70 mL