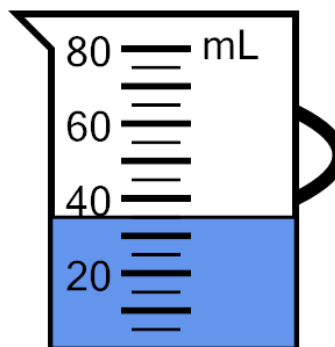




Math worksheet on 'Measure Volume (milliliters) - Fives, Partly Marked (Level 1)'. Part of a broader unit on 'Measurement - Units Intro - Metric'

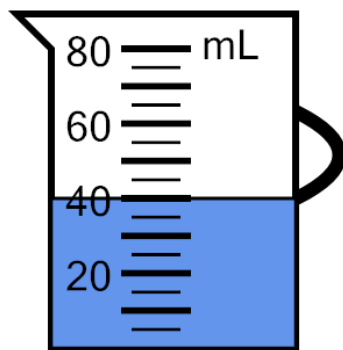
Learn online: app.mobius.academy/math/units/measurement_unit_intro_metric/

1 Measure the volume of water in the measuring cup



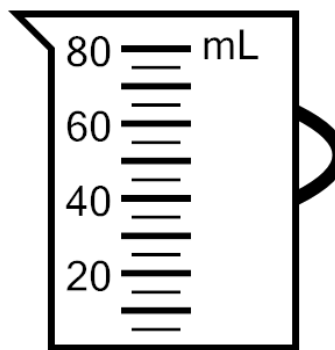
| a | b | c |
|-------|-------|-------|
| 30 mL | 35 mL | 20 mL |
| d | e | f |
| 45 mL | 10 mL | 5 mL |

2 Measure the volume of water in the measuring cup



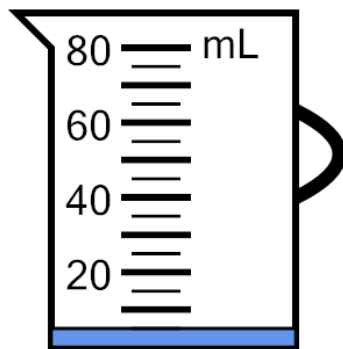
| a | b | c |
|-------|-------|-------|
| 50 mL | 35 mL | 55 mL |
| d | e | f |
| 60 mL | 40 mL | 15 mL |

3 Measure the volume of water in the measuring cup



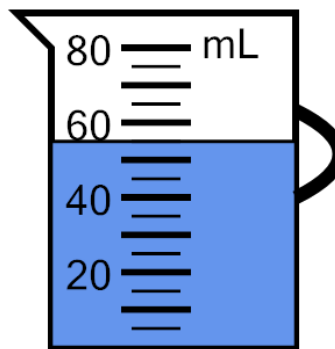
| a | b | c |
|-------|-------|-------|
| 10 mL | 20 mL | 5 mL |
| d | e | f |
| 0 mL | 30 mL | 15 mL |

4 Measure the volume of water in the measuring cup



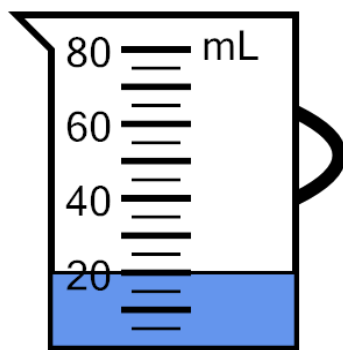
| a | b | c |
|-------|-------|-------|
| 30 mL | 25 mL | 20 mL |
| d | e | f |
| 15 mL | 5 mL | 10 mL |

5 Measure the volume of water in the measuring cup



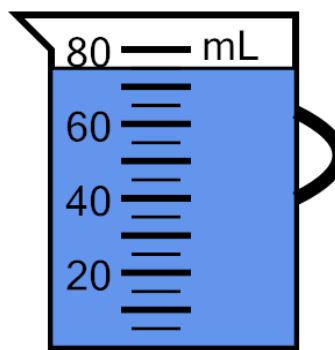
| a | b | c |
|-------|-------|-------|
| 80 mL | 45 mL | 65 mL |
| d | e | f |
| 55 mL | 35 mL | 30 mL |

6 Measure the volume of water in the measuring cup



| a | b | c |
|-------|-------|-------|
| 20 mL | 10 mL | 45 mL |
| d | e | f |
| 35 mL | 5 mL | 25 mL |

7 Measure the volume of water in the measuring cup



| a | b | c |
|-------|--------|-------|
| 90 mL | 100 mL | 45 mL |
| d | e | f |
| 95 mL | 75 mL | 85 mL |