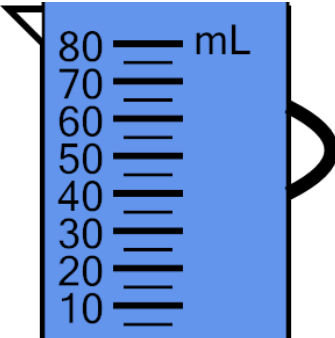




Math worksheet on 'Measure Volume (milliliters) - Tens, Fully Marked (Level 1)'. Part of a broader unit on 'Measurement - Units Intro - Metric'

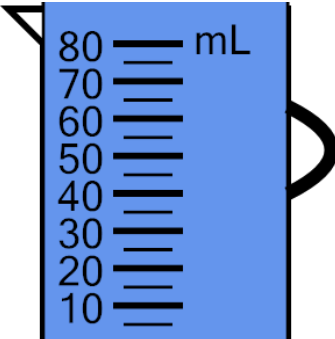
Learn online: [app.mobius.academy/math/units/measurement\\_unit\\_intro\\_metric/](http://app.mobius.academy/math/units/measurement_unit_intro_metric/)

**1** Measure the volume of water in the measuring cup



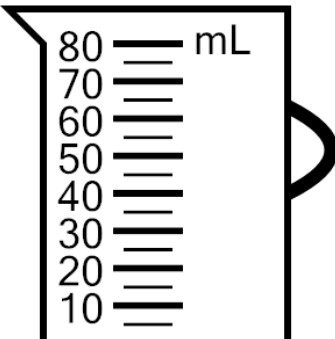
|          |          |          |
|----------|----------|----------|
| <b>a</b> | <b>b</b> | <b>c</b> |
| 95 mL    | 125 mL   | 130 mL   |
| <b>d</b> | <b>e</b> | <b>f</b> |
| 115 mL   | 110 mL   | 80 mL    |

**2** Measure the volume of water in the measuring cup



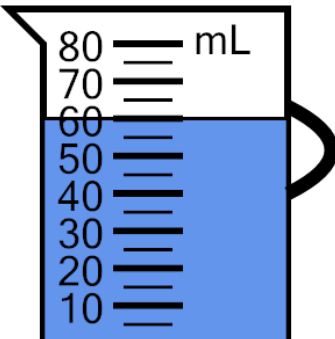
|          |          |          |
|----------|----------|----------|
| <b>a</b> | <b>b</b> | <b>c</b> |
| 140 mL   | 125 mL   | 160 mL   |
| <b>d</b> | <b>e</b> | <b>f</b> |
| 115 mL   | 110 mL   | 155 mL   |

**3** Measure the volume of water in the measuring cup



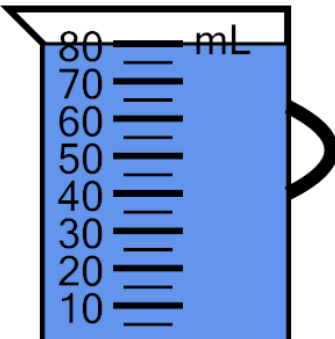
|          |          |          |
|----------|----------|----------|
| <b>a</b> | <b>b</b> | <b>c</b> |
| 5 mL     | 10 mL    | 15 mL    |
| <b>d</b> | <b>e</b> | <b>f</b> |
| 0 mL     | 20 mL    | 25 mL    |

**4** Measure the volume of water in the measuring cup



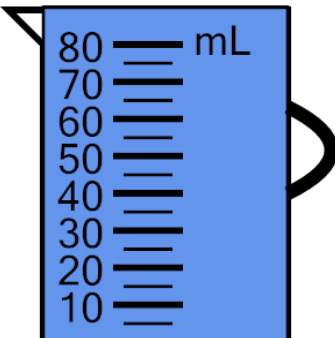
|          |          |          |
|----------|----------|----------|
| <b>a</b> | <b>b</b> | <b>c</b> |
| 60 mL    | 65 mL    | 70 mL    |
| <b>d</b> | <b>e</b> | <b>f</b> |
| 80 mL    | 45 mL    | 50 mL    |

**5** Measure the volume of water in the measuring cup



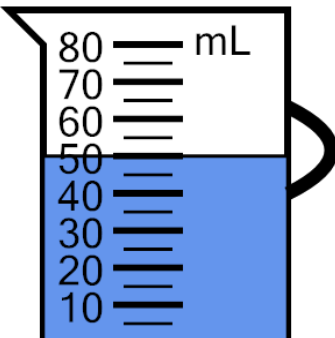
|          |          |          |
|----------|----------|----------|
| <b>a</b> | <b>b</b> | <b>c</b> |
| 80 mL    | 90 mL    | 85 mL    |
| <b>d</b> | <b>e</b> | <b>f</b> |
| 105 mL   | 70 mL    | 95 mL    |

**6** Measure the volume of water in the measuring cup



|          |          |          |
|----------|----------|----------|
| <b>a</b> | <b>b</b> | <b>c</b> |
| 75 mL    | 70 mL    | 60 mL    |
| <b>d</b> | <b>e</b> | <b>f</b> |
| 90 mL    | 100 mL   | 85 mL    |

**7** Measure the volume of water in the measuring cup



|          |          |          |
|----------|----------|----------|
| <b>a</b> | <b>b</b> | <b>c</b> |
| 70 mL    | 50 mL    | 45 mL    |
| <b>d</b> | <b>e</b> | <b>f</b> |
| 35 mL    | 65 mL    | 40 mL    |