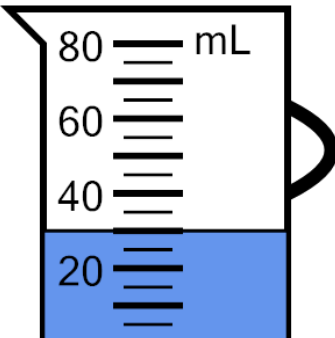




Math worksheet on 'Measure Volume (milliliters) - Tens, Partly Marked (Level 1)'. Part of a broader unit on 'Measurement - Units Intro - Metric'

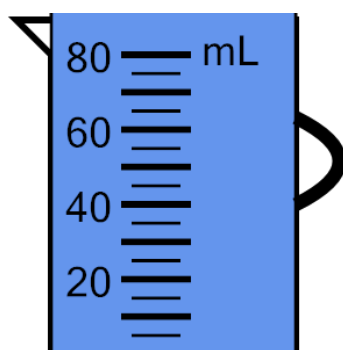
Learn online: app.mobius.academy/math/units/measurement_unit_intro_metric/

1 Measure the volume of water in the measuring cup



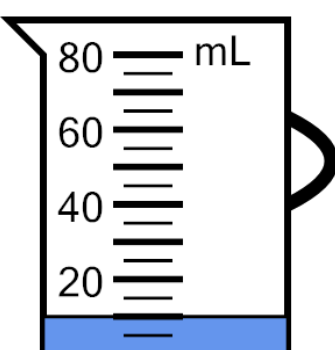
a	b	c
25 mL	30 mL	15 mL
d	e	f
40 mL	5 mL	20 mL

2 Measure the volume of water in the measuring cup



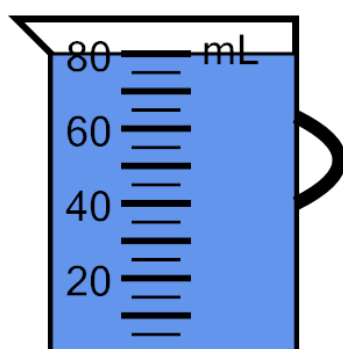
a	b	c
100 mL	90 mL	145 mL
d	e	f
130 mL	120 mL	140 mL

3 Measure the volume of water in the measuring cup



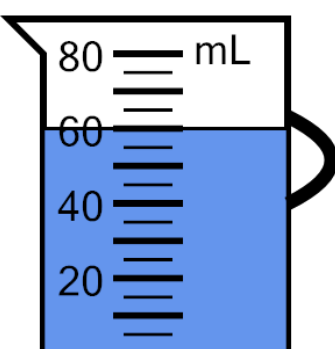
a	b	c
35 mL	10 mL	25 mL
d	e	f
20 mL	15 mL	5 mL

4 Measure the volume of water in the measuring cup



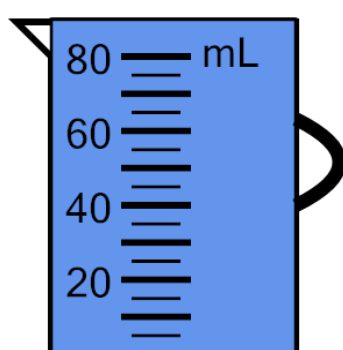
a	b	c
90 mL	50 mL	80 mL
d	e	f
60 mL	65 mL	100 mL

5 Measure the volume of water in the measuring cup



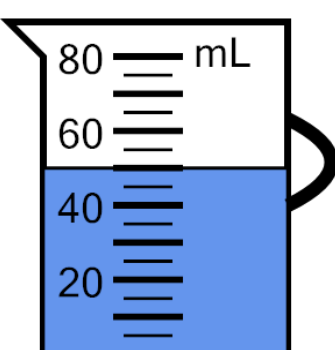
a	b	c
75 mL	85 mL	45 mL
d	e	f
60 mL	35 mL	40 mL

6 Measure the volume of water in the measuring cup



a	b	c
105 mL	60 mL	80 mL
d	e	f
110 mL	70 mL	90 mL

7 Measure the volume of water in the measuring cup



a	b	c
45 mL	35 mL	30 mL
d	e	f
20 mL	50 mL	65 mL