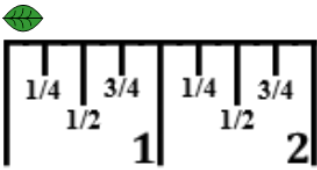




Math worksheet on 'Measure with Ruler (inches) - Quarter Inches Under 1 (labelled) from Start (Level 1)'. Part of a broader unit on 'Fractions - Mixed - Intro'

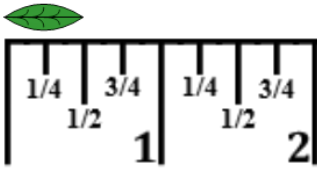
Learn online: [app.mobius.academy/math/units/fractions\\_intro/](http://app.mobius.academy/math/units/fractions_intro/)

**1** Measure the length of the leaf in inches using the ruler



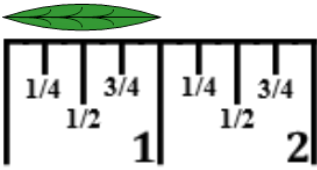
<b>a</b> $\frac{1}{4}$ in	<b>b</b> $\frac{3}{4}$ in	<b>c</b> $2\frac{1}{2}$ in
<b>d</b> $\frac{1}{2}$ in	<b>e</b> $2\frac{1}{4}$ in	<b>f</b> $1\frac{1}{4}$ in

**2** Measure the length of the leaf in inches using the ruler



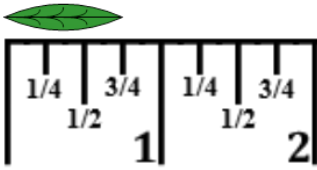
<b>a</b> $1\frac{1}{4}$ in	<b>b</b> $\frac{3}{4}$ in	<b>c</b> $\frac{1}{4}$ in
<b>d</b> $\frac{1}{2}$ in	<b>e</b> $1\frac{3}{4}$ in	<b>f</b> $2\frac{1}{2}$ in

**3** Measure the length of the leaf in inches using the ruler



<b>a</b> 1 in	<b>b</b> $3\frac{1}{4}$ in	<b>c</b> $\frac{1}{2}$ in
<b>d</b> $2\frac{1}{2}$ in	<b>e</b> $\frac{1}{4}$ in	<b>f</b> $\frac{3}{4}$ in

**4** Measure the length of the leaf in inches using the ruler



<b>a</b> $\frac{1}{2}$ in	<b>b</b> $\frac{1}{4}$ in	<b>c</b> $1\frac{3}{4}$ in
<b>d</b> $\frac{3}{4}$ in	<b>e</b> 3 in	<b>f</b> $1\frac{1}{2}$ in