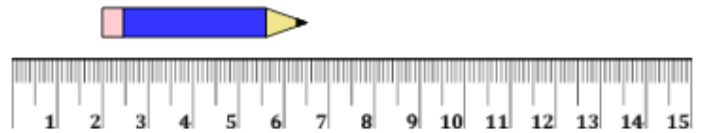




Math worksheet on 'Measure with Ruler (metric) - Half Centimeters from Middle (Level 1)'. Part of a broader unit on 'Measurement - Units Intro - Metric'

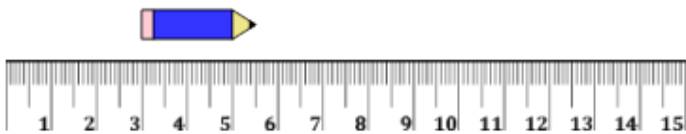
Learn online: [app.mobius.academy/math/units/measurement\\_unit\\_intro\\_metric/](http://app.mobius.academy/math/units/measurement_unit_intro_metric/)

1 Measure the length of the pencil using the centimeter ruler



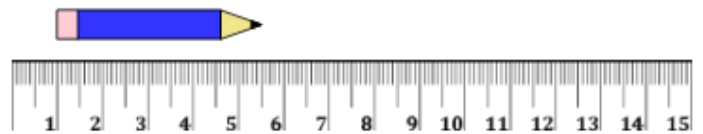
- |   |        |   |      |
|---|--------|---|------|
| a | 7.5 cm | b | 4 cm |
| c | 4.5 cm | d | 8 cm |
| e | 1.5 cm | f | 3 cm |

2 Measure the length of the pencil using the centimeter ruler



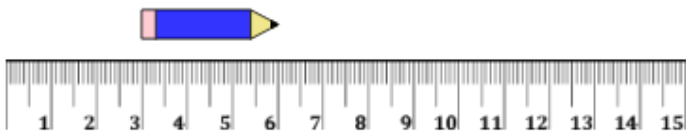
- |   |        |   |        |
|---|--------|---|--------|
| a | 1.5 cm | b | 6 cm   |
| c | 4 cm   | d | 5.5 cm |
| e | 2.5 cm | f | 3 cm   |

3 Measure the length of the pencil using the centimeter ruler



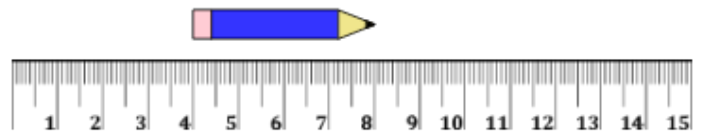
- |   |        |   |      |
|---|--------|---|------|
| a | 4.5 cm | b | 6 cm |
| c | 3 cm   | d | 4 cm |
| e | 2 cm   | f | 9 cm |

4 Measure the length of the pencil using the centimeter ruler



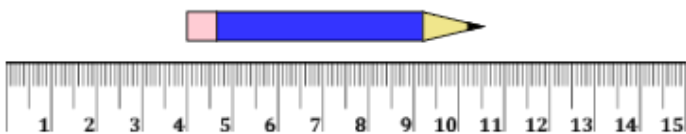
- |   |        |   |        |
|---|--------|---|--------|
| a | 1.5 cm | b | 4.5 cm |
| c | 2 cm   | d | 3 cm   |
| e | 6.5 cm | f | 5.5 cm |

5 Measure the length of the pencil using the centimeter ruler



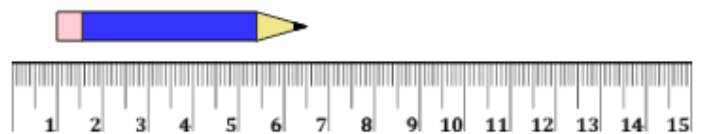
- |   |        |   |        |
|---|--------|---|--------|
| a | 1 cm   | b | 5.5 cm |
| c | 8.5 cm | d | 4 cm   |
| e | 4.5 cm | f | 3.5 cm |

6 Measure the length of the pencil using the centimeter ruler



- |   |        |   |        |
|---|--------|---|--------|
| a | 9.5 cm | b | 6.5 cm |
| c | 6 cm   | d | 7 cm   |
| e | 9 cm   | f | 7.5 cm |

7 Measure the length of the pencil using the centimeter ruler



- |   |        |   |        |
|---|--------|---|--------|
| a | 0.5 cm | b | 10 cm  |
| c | 6 cm   | d | 7 cm   |
| e | 5 cm   | f | 5.5 cm |