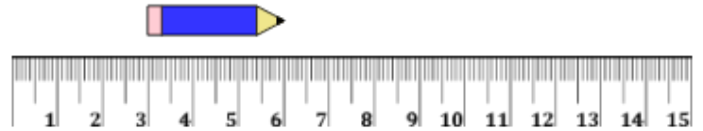




Math worksheet on 'Measure with Ruler (metric) - Millimeters (10s) from Middle (Level 1)'. Part of a broader unit on 'Measurement - Units Intro - Metric'

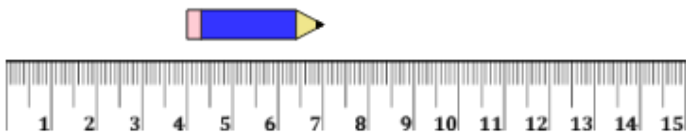
Learn online: app.mobius.academy/math/units/measurement_unit_intro_metric/

1 Measure the length of the pencil in millimeters using the centimeter ruler



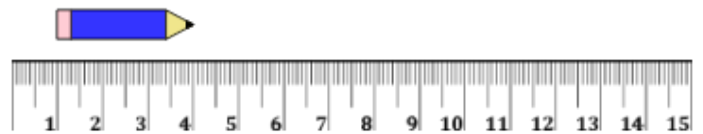
a	b	c	d	e	f
25 mm	15 mm	30 mm	60 mm	20 mm	50 mm

2 Measure the length of the pencil in millimeters using the centimeter ruler



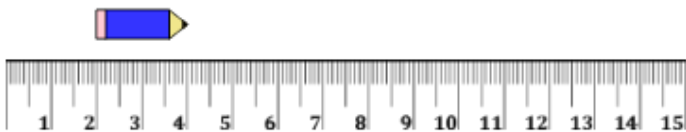
a	b	c	d	e	f
5 mm	15 mm	30 mm	75 mm	35 mm	25 mm

3 Measure the length of the pencil in millimeters using the centimeter ruler



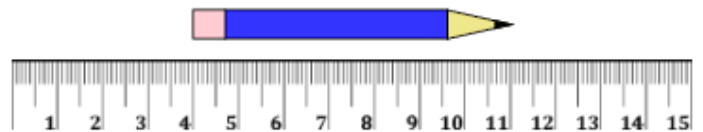
a	b	c	d	e	f
55 mm	75 mm	65 mm	60 mm	20 mm	30 mm

4 Measure the length of the pencil in millimeters using the centimeter ruler



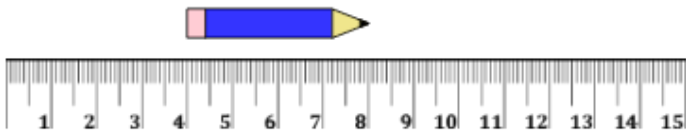
a	b	c	d	e	f
50 mm	20 mm	60 mm	10 mm	25 mm	40 mm

5 Measure the length of the pencil in millimeters using the centimeter ruler



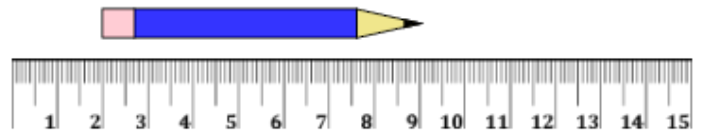
a	95 mm	b	50 mm
c	105 mm	d	80 mm
e	70 mm	f	30 mm

6 Measure the length of the pencil in millimeters using the centimeter ruler



a	b	c	d	e	f
20 mm	35 mm	55 mm	80 mm	10 mm	40 mm

7 Measure the length of the pencil in millimeters using the centimeter ruler



a	35 mm	b	95 mm
c	45 mm	d	105 mm
e	70 mm	f	40 mm