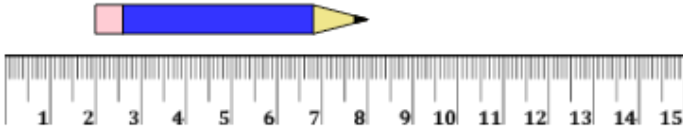


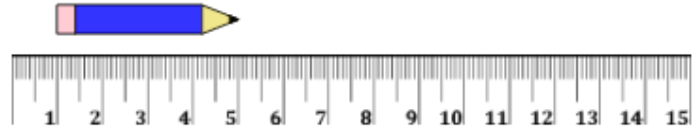
Measure with Ruler (metric) - Whole Centimeters from Middle

1 Measure the length of the pencil using the centimeter ruler



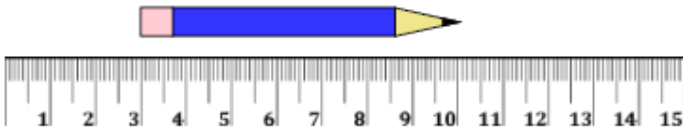
A	2 cm	B	7.5 cm
C	6 cm	D	2.5 cm
E	3.5 cm	F	3 cm

2 Measure the length of the pencil using the centimeter ruler



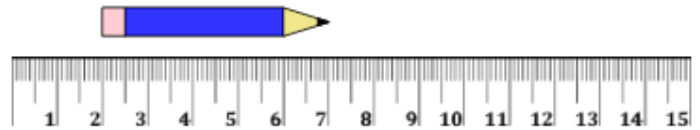
A	5.5 cm	B	8.5 cm
C	5 cm	D	4 cm
E	1.5 cm	F	2 cm

3 Measure the length of the pencil using the centimeter ruler



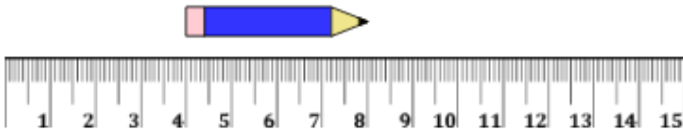
A	6 cm	B	10 cm
C	8 cm	D	7 cm
E	7.5 cm	F	2 cm

4 Measure the length of the pencil using the centimeter ruler



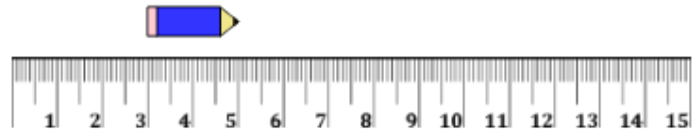
A	6 cm	B	9 cm
C	5 cm	D	2.5 cm
E	4.5 cm	F	6.5 cm

5 Measure the length of the pencil using the centimeter ruler



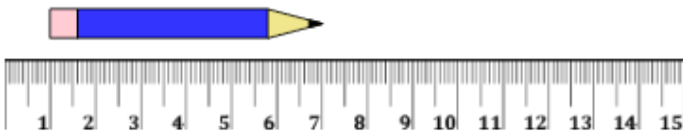
A	8.5 cm	B	6.5 cm
C	4.5 cm	D	2.5 cm
E	4 cm	F	2 cm

6 Measure the length of the pencil using the centimeter ruler



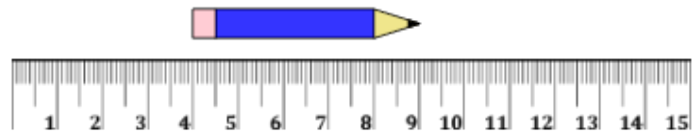
A	2 cm	B	3 cm
C	6.5 cm	D	2.5 cm
E	5.5 cm	F	3.5 cm

7 Measure the length of the pencil using the centimeter ruler



A	1 cm	B	8.5 cm
C	4.5 cm	D	9.5 cm
E	6 cm	F	7 cm

8 Measure the length of the pencil using the centimeter ruler



A	5 cm	B	3.5 cm
C	8 cm	D	1 cm
E	1.5 cm	F	6.5 cm